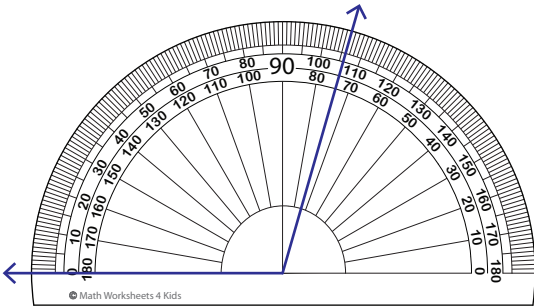


Reading a Protractor - Match

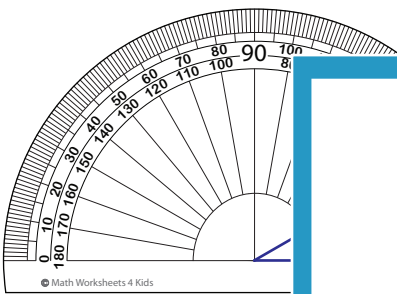
Read the protractor and match the angle to its corresponding measures.

1)



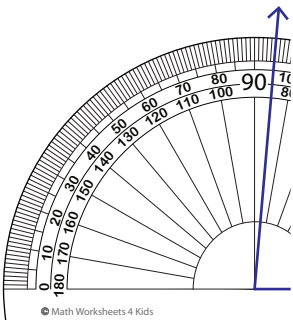
30°

2)



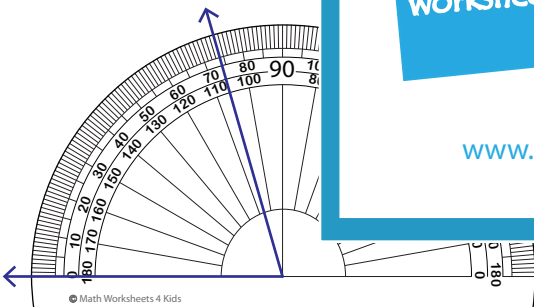
85°

3)



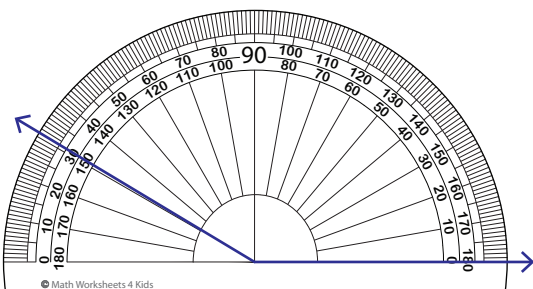
149°

4)



106°

5)



74°

PREVIEW

Gain complete access to the largest collection of worksheets in all subjects!

Members, please log in to download this worksheet.

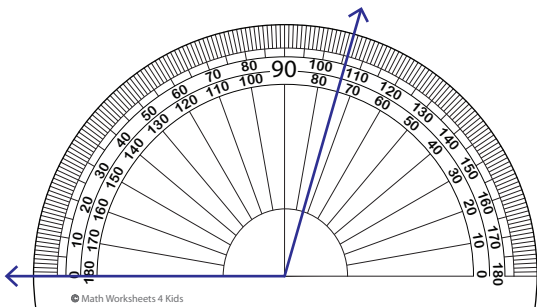
Not a member? Please sign up to gain complete access.

www.mathworksheets4kids.com

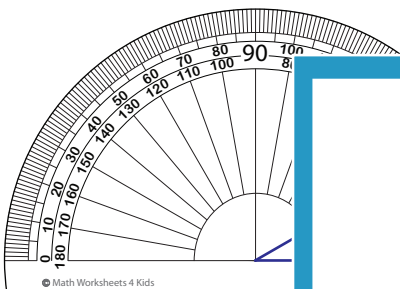
Reading a Protractor - Match

Read the protractor and match the angle to its corresponding measures.

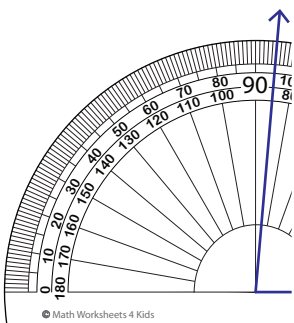
1)



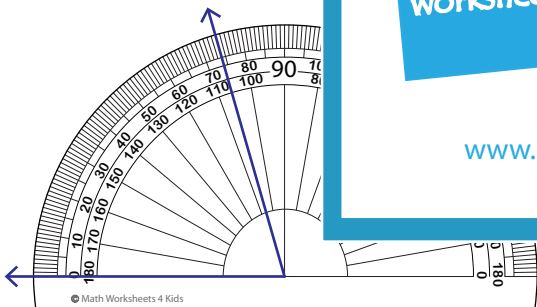
2)



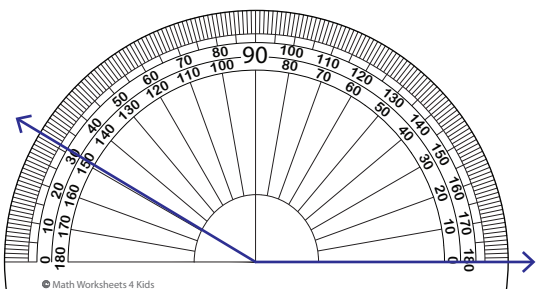
3)



4)



5)



PREVIEW

Gain complete access to the largest collection of worksheets in all subjects!

Members, please log in to download this worksheet.

Not a member? Please sign up to gain complete access.

www.mathworksheets4kids.com

30°

85°

149°

106°

74°