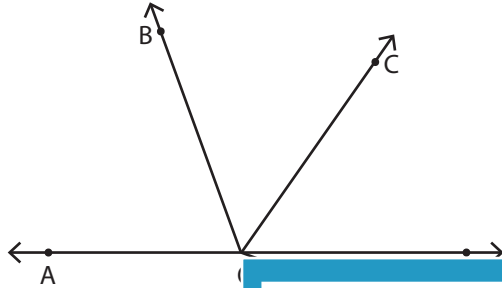


Name : _____

Angles on a Straight Line

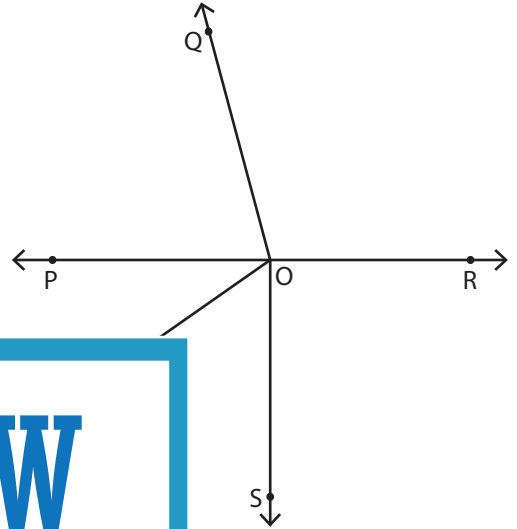
Find the measure of the specified angles.

1)



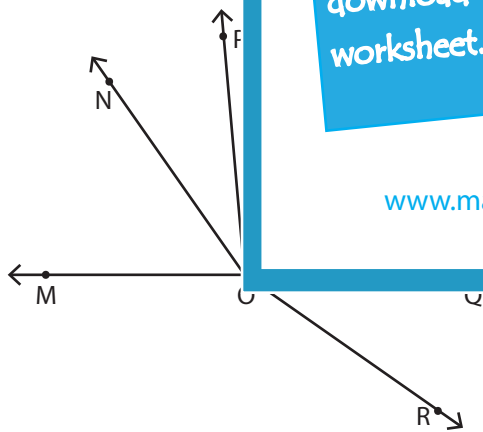
- $m\angle DOE = 20^\circ$ m
- $m\angle AOC = 125^\circ$ m
- $m\angle BOC = 55^\circ$ m

2)

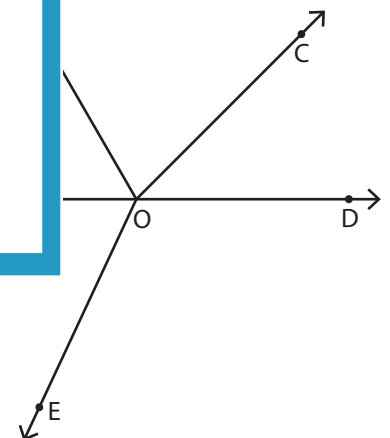


- $m\angle TOP = \underline{\hspace{2cm}}$
- $m\angle POS = \underline{\hspace{2cm}}$
- $m\angle QOT = \underline{\hspace{2cm}}$

3)



- $m\angle MON = 55^\circ$ $m\angle MOP = \underline{\hspace{2cm}}$
- $m\angle ROM = 145^\circ$ $m\angle NOP = \underline{\hspace{2cm}}$
- $m\angle POQ = 95^\circ$ $m\angle QOR = \underline{\hspace{2cm}}$



- $m\angle DOE = 115^\circ$ $m\angle BOD = \underline{\hspace{2cm}}$
- $m\angle AOB = 60^\circ$ $m\angle EOC = \underline{\hspace{2cm}}$
- $m\angle BOC = 75^\circ$ $m\angle AOC = \underline{\hspace{2cm}}$

PREVIEW

Gain complete access to the largest collection of worksheets in all subjects!

Members, please log in to download this worksheet.

Not a member? Please sign up to gain complete access.

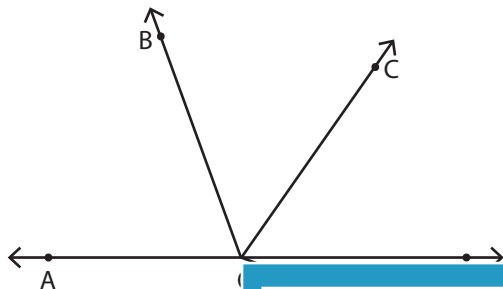
www.mathworksheets4kids.com

Name : _____

Angles on a Straight Line

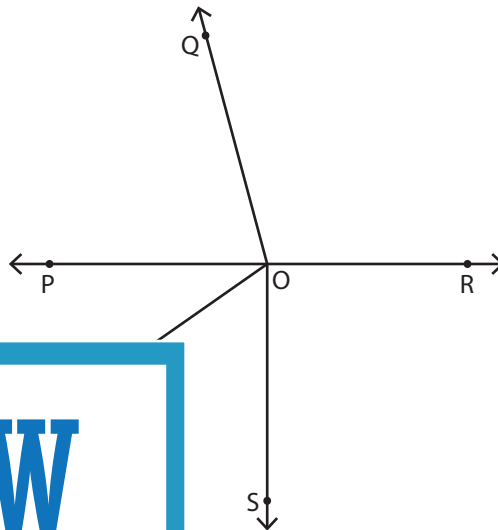
Find the measure of the specified angles.

1)



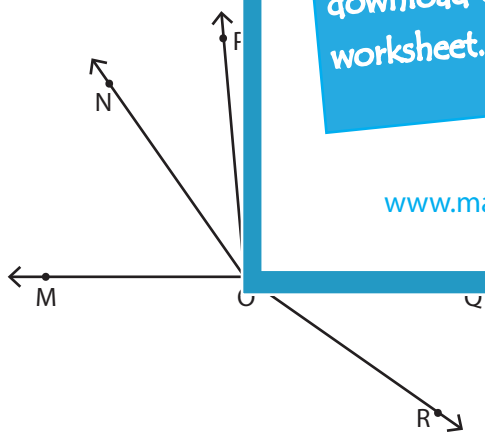
- $m\angle DOE = 20^\circ$
- $m\angle AOC = 125^\circ$
- $m\angle BOC = 55^\circ$

2)

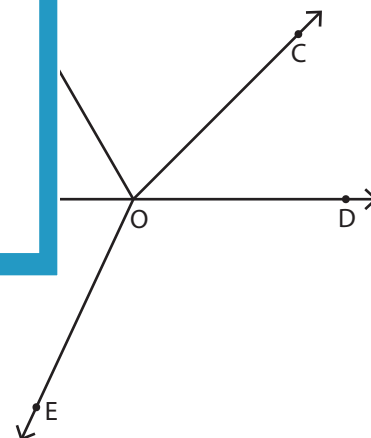


- $m\angle TOP = \underline{35^\circ}$
- $m\angle POS = \underline{90^\circ}$
- $m\angle QOT = \underline{110^\circ}$

3)



- $m\angle MON = 55^\circ$
- $m\angle MOP = \underline{85^\circ}$
- $m\angle ROM = 145^\circ$
- $m\angle NOP = \underline{30^\circ}$
- $m\angle POQ = 95^\circ$
- $m\angle QOR = \underline{35^\circ}$



- $m\angle DOE = 115^\circ$
- $m\angle BOD = \underline{120^\circ}$
- $m\angle AOB = 60^\circ$
- $m\angle EOC = \underline{160^\circ}$
- $m\angle BOC = 75^\circ$
- $m\angle AOC = \underline{135^\circ}$

PREVIEW

Gain complete access to the largest collection of worksheets in all subjects!

Members, please log in to download this worksheet.

Not a member? Please sign up to gain complete access.

www.mathworksheets4kids.com