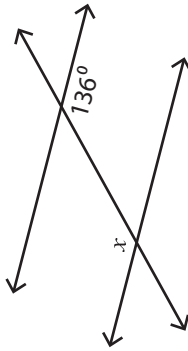


Angles in Transversal

Easy: S1

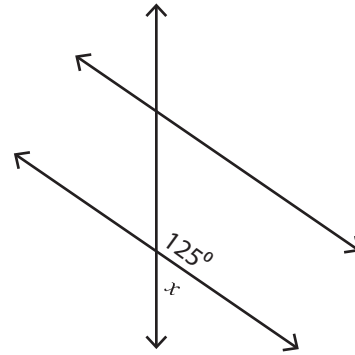
Find the value of x .

1)



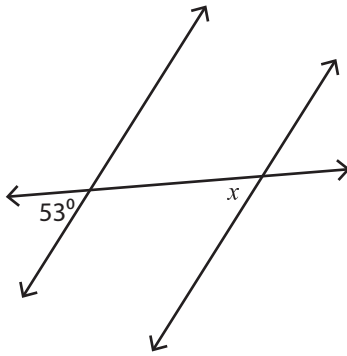
$x =$ _____

2)



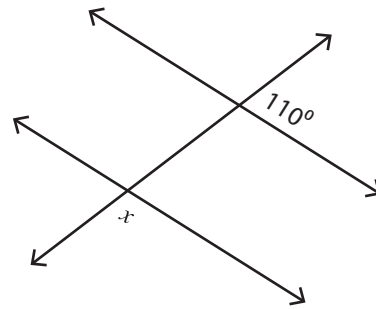
$x =$ _____

3)



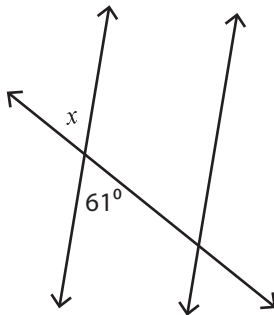
$x =$ _____

4)



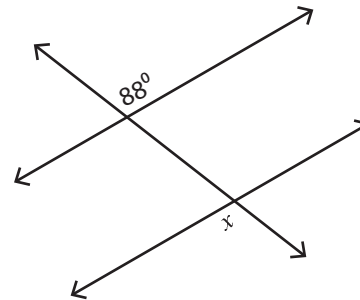
$x =$ _____

5)



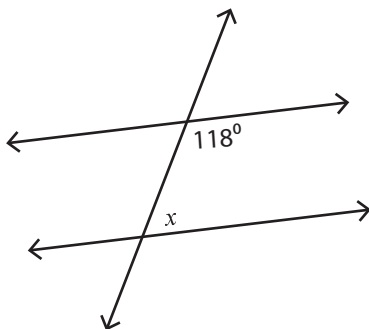
$x =$ _____

6)



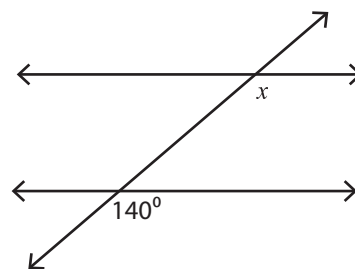
$x =$ _____

7)



$x =$ _____

8)



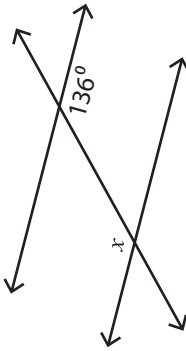
$x =$ _____

Angles in Transversal

Easy: S1

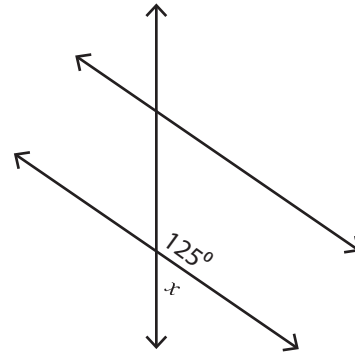
Find the value of x .

1)



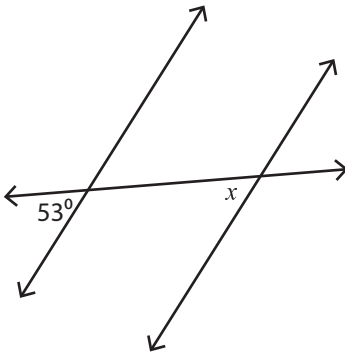
$$x = \underline{136^\circ}$$

2)



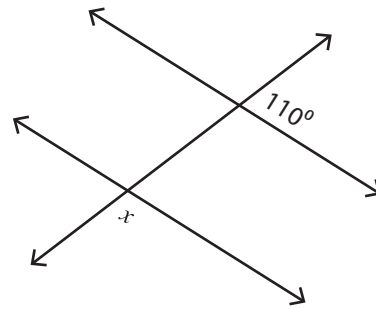
$$x = \underline{55^\circ}$$

3)



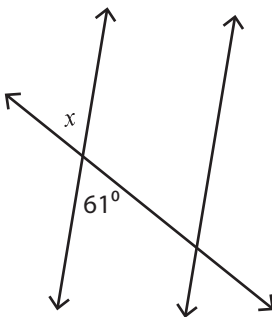
$$x = \underline{53^\circ}$$

4)



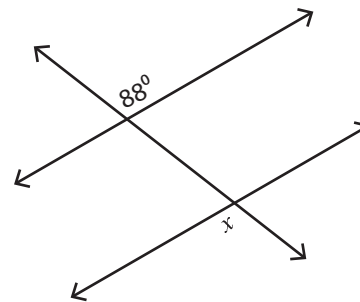
$$x = \underline{70^\circ}$$

5)



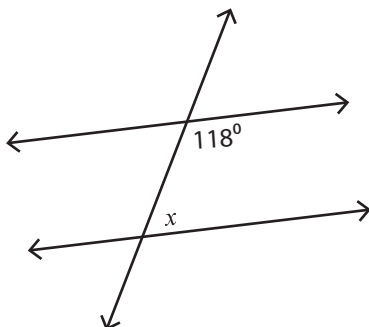
$$x = \underline{61^\circ}$$

6)



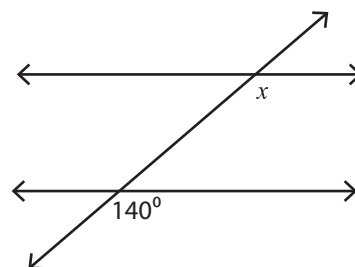
$$x = \underline{88^\circ}$$

7)



$$x = \underline{62^\circ}$$

8)



$$x = \underline{140^\circ}$$