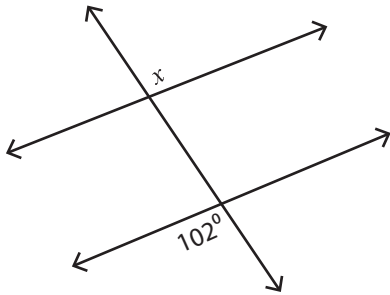


Angles in Transversal

Easy: S3

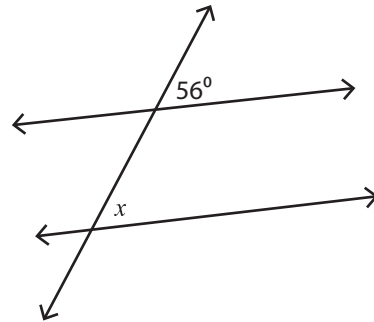
Find the value of x .

1)



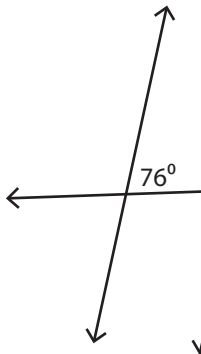
$x =$ _____

2)

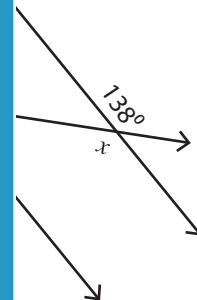


$x =$ _____

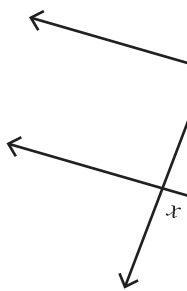
3)



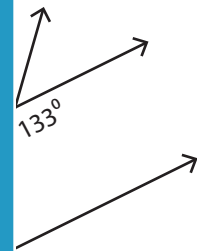
$x =$ _____



5)



$x =$ _____



PREVIEW

Access the largest collection of worksheets for just **\$19.95** per year!

Members, please log in to download this worksheet.

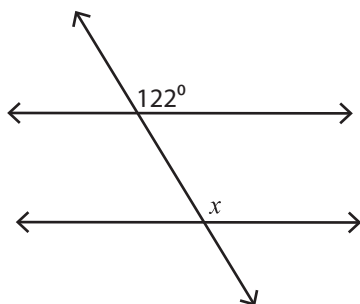
Log in

Not a member? Please sign up to gain complete access.

Sign up

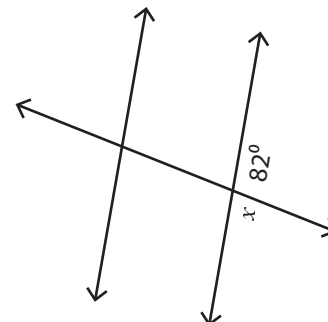
www.mathworksheets4kids.com

7)



$x =$ _____

8)



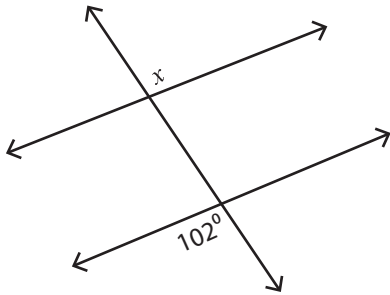
$x =$ _____

Angles in Transversal

Easy: S3

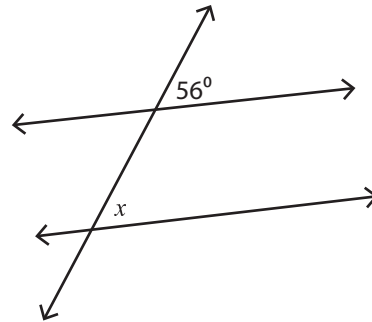
Find the value of x .

1)



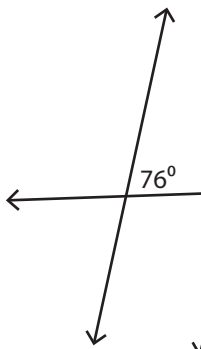
$x = 102^\circ$

2)

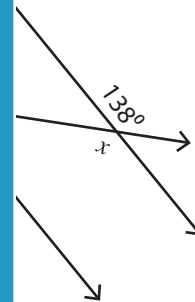


$x = 56^\circ$

3)

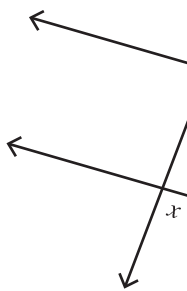


$x = 104^\circ$

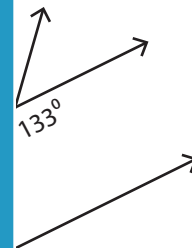


$x = 38^\circ$

5)



$x = 91^\circ$



$x = 33^\circ$

PREVIEW

Access the largest collection of worksheets for just **\$19.95** per year!

Members, please log in to download this worksheet.

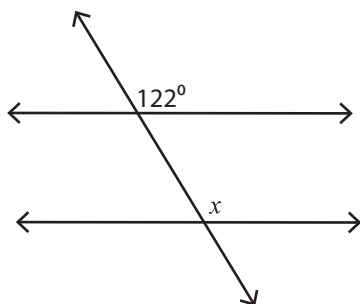
Log in

Not a member? Please sign up to gain complete access.

Sign up

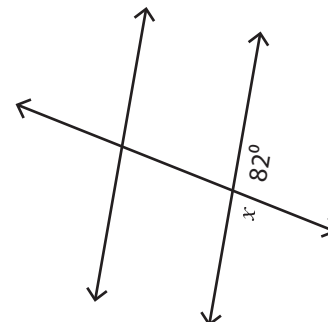
www.mathworksheets4kids.com

7)



$x = 122^\circ$

8)



$x = 98^\circ$