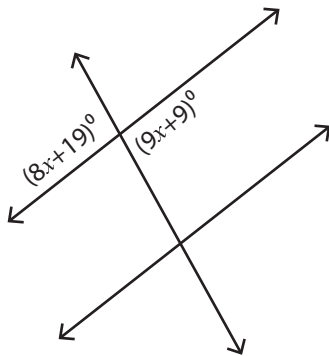


Angles in Transversal

Difficult: S1

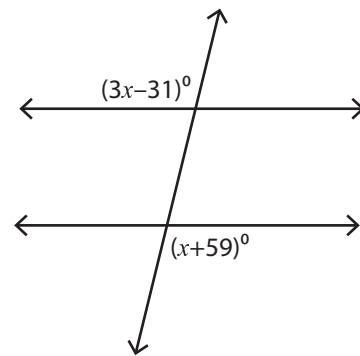
Find the value of x .

1)



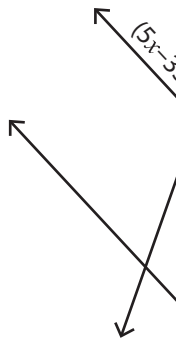
$x =$ _____

2)

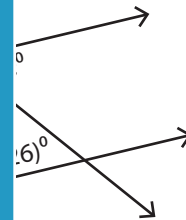


$x =$ _____

3)

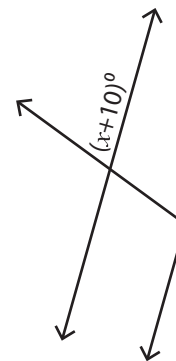


$x =$ _____

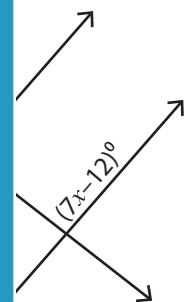


$x =$ _____

5)



$x =$ _____



$x =$ _____

PREVIEW

Access the largest collection of
worksheets for just **\$19.95** per year!

Members, please
log in to
download this
worksheet.

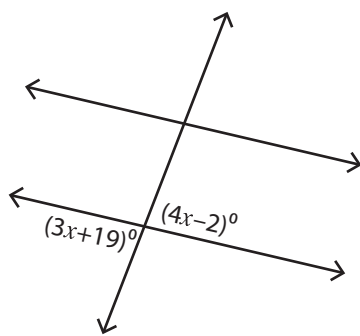
Log in

Not a member?
Please sign up to
gain complete
access.

Sign up

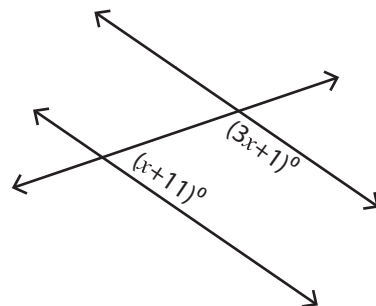
www.mathworksheets4kids.com

7)



$x =$ _____

8)



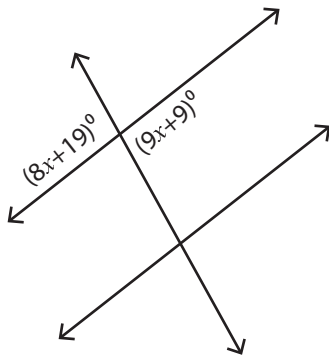
$x =$ _____

Angles in Transversal

Difficult: S1

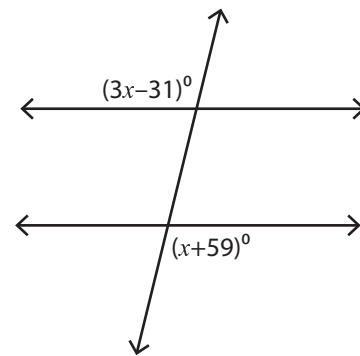
Find the value of x .

1)



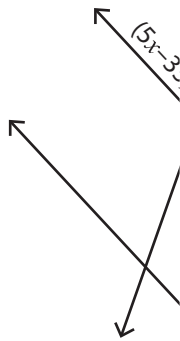
$x = \underline{10}$

2)

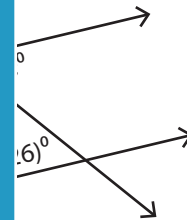


$x = \underline{45}$

3)

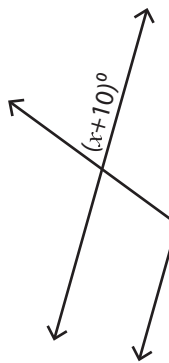


$x = \underline{1}$

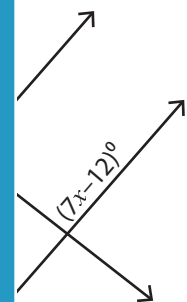


$x = \underline{26}$

5)



$x = \underline{6}$



$x = \underline{15}$

PREVIEWAccess the largest collection of worksheets for just **\$19.95** per year!

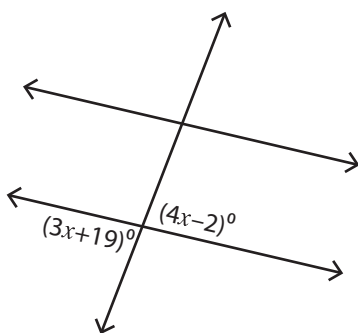
Members, please log in to download this worksheet.

Log in

Not a member? Please sign up to gain complete access.

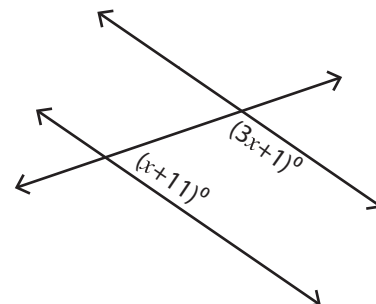
Sign upwww.mathworksheets4kids.com

7)



$x = \underline{21}$

8)



$x = \underline{42}$