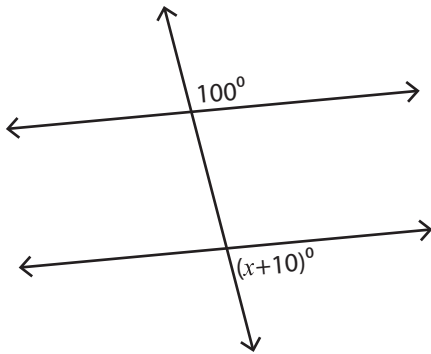


## Angles in Transversal

Moderate: S1

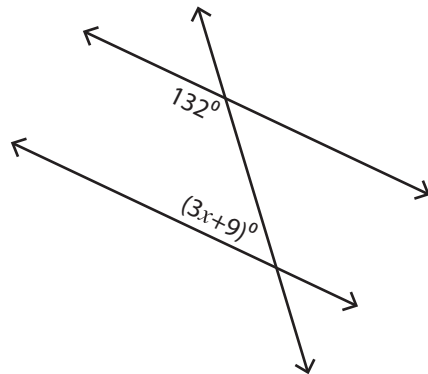
Find the value of  $x$ .

1)



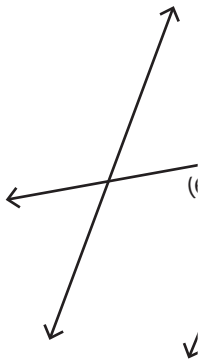
$x =$  \_\_\_\_\_

2)



$x =$  \_\_\_\_\_

3)



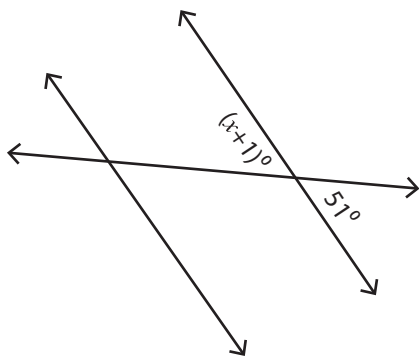
$x =$  \_\_\_\_\_

5)



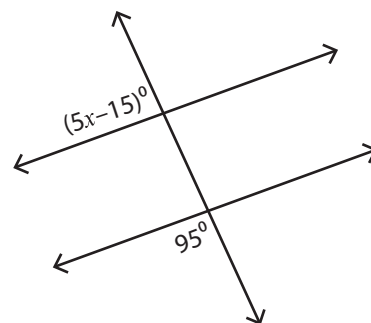
$x =$  \_\_\_\_\_

7)



$x =$  \_\_\_\_\_

8)



$x =$  \_\_\_\_\_

# PREVIEW

Access the largest collection of worksheets for just **\$19.95** per year!

Members, please log in to download this worksheet.

Log in

Not a member? Please sign up to gain complete access.

Sign up

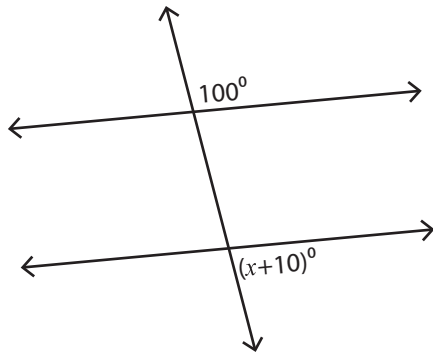
[www.mathworksheets4kids.com](http://www.mathworksheets4kids.com)

**Angles in Transversal**

Moderate: S1

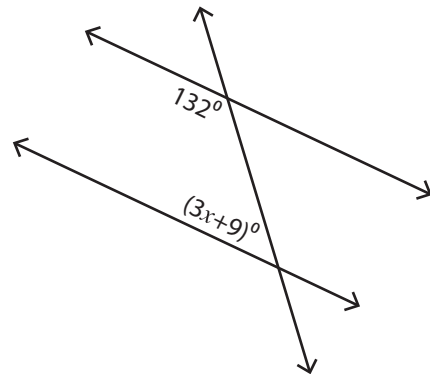
Find the value of  $x$ .

1)



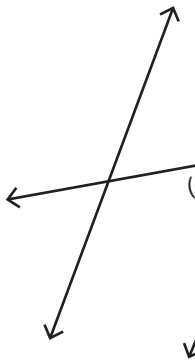
$x = \underline{70}$

2)



$x = \underline{13}$

3)



$x = \underline{1}$

# PREVIEW

Access the largest collection of  
worksheets for just **\$19.95** per year!

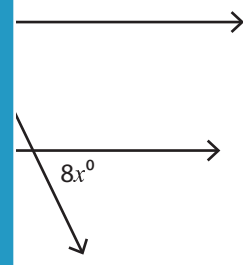
Members, please  
log in to  
download this  
worksheet.

Log in

Not a member?  
Please sign up to  
gain complete  
access.

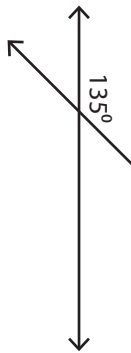
Sign up

[www.mathworksheets4kids.com](http://www.mathworksheets4kids.com)

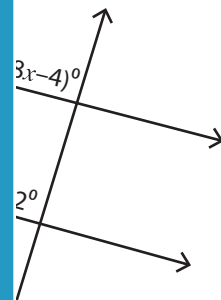


$x = \underline{8}$

5)

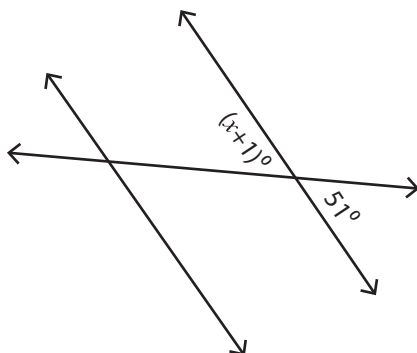


$x = \underline{12}$



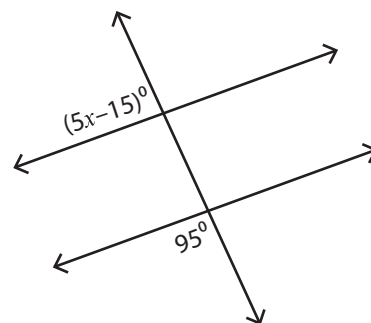
$x = \underline{12}$

7)



$x = \underline{50}$

8)



$x = \underline{20}$