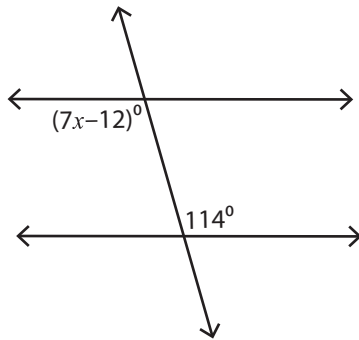


## Angles in Transversal

Moderate: S2

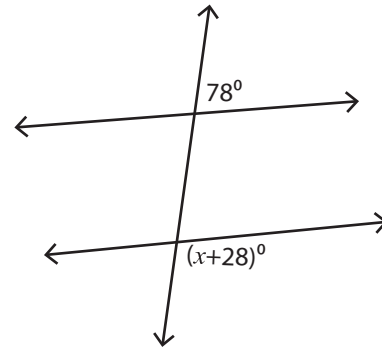
Find the value of  $x$ .

1)



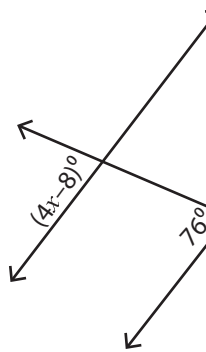
$x =$  \_\_\_\_\_

2)

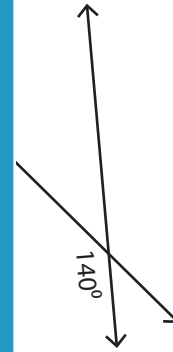


$x =$  \_\_\_\_\_

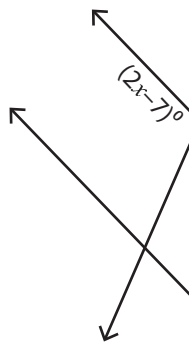
3)



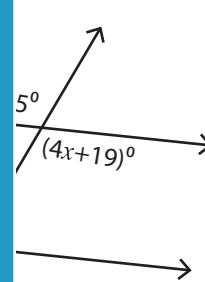
$x =$  \_\_\_\_\_



5)



$x =$  \_\_\_\_\_



# PREVIEW

Access the largest collection of worksheets for just **\$19.95** per year!

Members, please log in to download this worksheet.

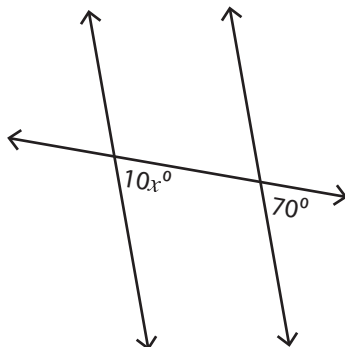
Log in

Not a member? Please sign up to gain complete access.

Sign up

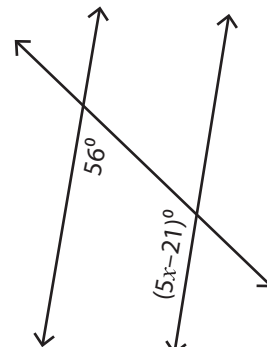
[www.mathworksheets4kids.com](http://www.mathworksheets4kids.com)

7)



$x =$  \_\_\_\_\_

8)



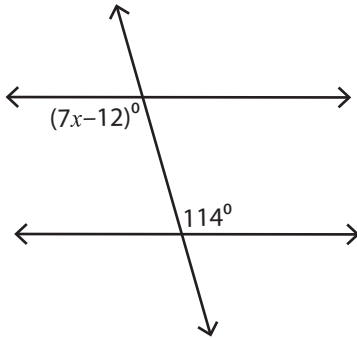
$x =$  \_\_\_\_\_

**Angles in Transversal**

Moderate: S2

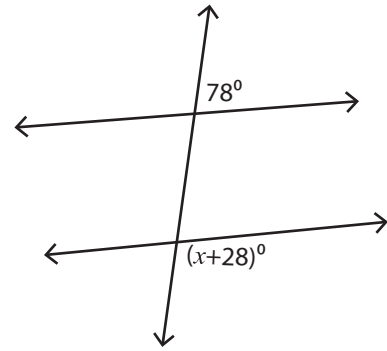
Find the value of  $x$ .

1)



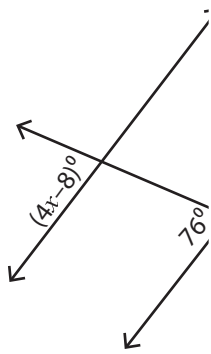
$x = \underline{18}$

2)

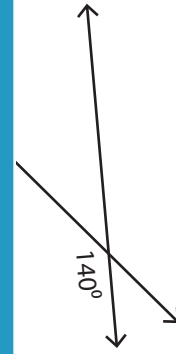


$x = \underline{74}$

3)

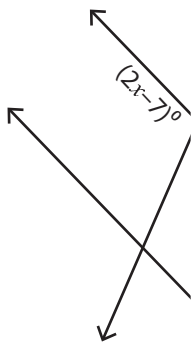


$x = \underline{2}$

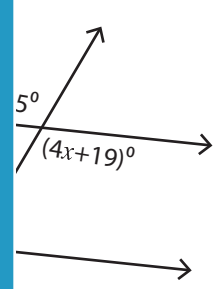


$\underline{4}$

5)



$x = \underline{6}$



$\underline{24}$

# PREVIEW

Access the largest collection of worksheets for just **\$19.95** per year!

Members, please log in to download this worksheet.

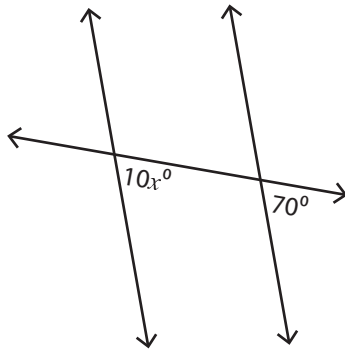
**Log in**

Not a member? Please sign up to gain complete access.

**Sign up**

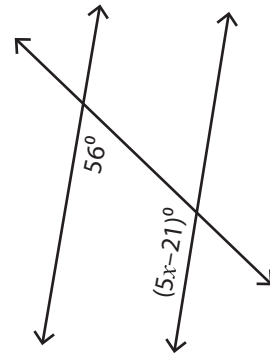
[www.mathworksheets4kids.com](http://www.mathworksheets4kids.com)

7)



$x = \underline{7}$

8)



$x = \underline{29}$