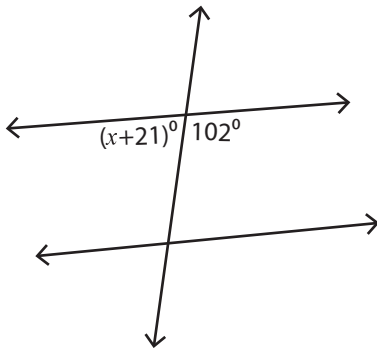


## Angles in Transversal

Moderate: S3

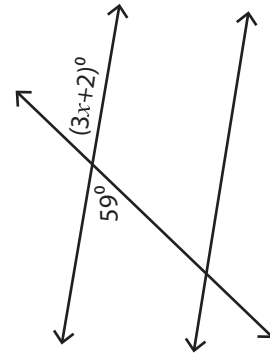
Find the value of  $x$ .

1)



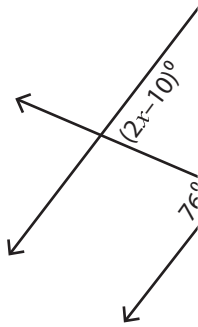
$x =$  \_\_\_\_\_

2)



$x =$  \_\_\_\_\_

3)



$x =$  \_\_\_\_\_

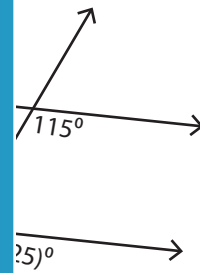


\_\_\_\_\_

5)

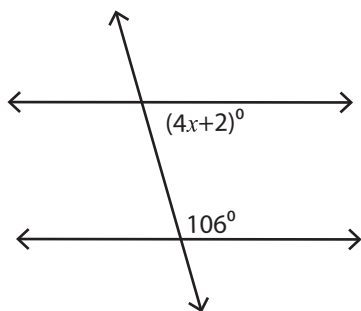


$x =$  \_\_\_\_\_



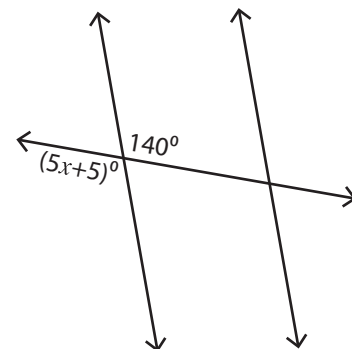
\_\_\_\_\_

7)



$x =$  \_\_\_\_\_

8)



$x =$  \_\_\_\_\_

# PREVIEW

Access the largest collection of  
worksheets for just **\$19.95** per year!

Members, please  
log in to  
download this  
worksheet.

**Log in**

Not a member?  
Please sign up to  
gain complete  
access.

**Sign up**

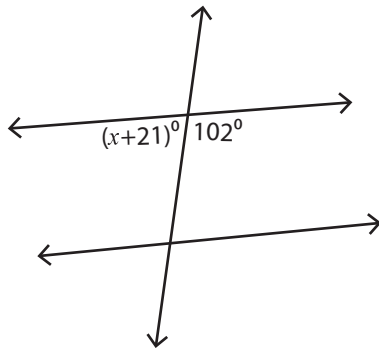
[www.mathworksheets4kids.com](http://www.mathworksheets4kids.com)

**Angles in Transversal**

Moderate: S3

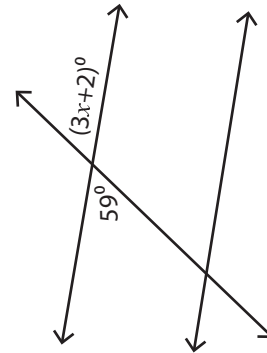
Find the value of  $x$ .

1)



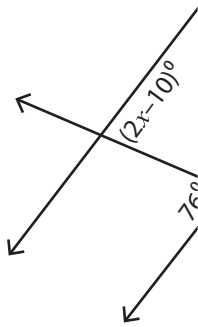
$x = \underline{57}$

2)



$x = \underline{19}$

3)



$x = \underline{4}$

**PREVIEW**Access the largest collection of worksheets for just **\$19.95** per year!

Members, please log in to download this worksheet.

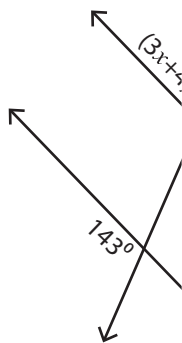
**Log in**

Not a member? Please sign up to gain complete access.

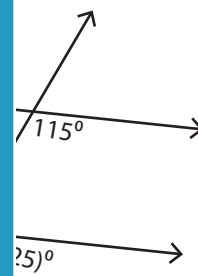
**Sign up**[www.mathworksheets4kids.com](http://www.mathworksheets4kids.com)

$x = \underline{28}$

5)

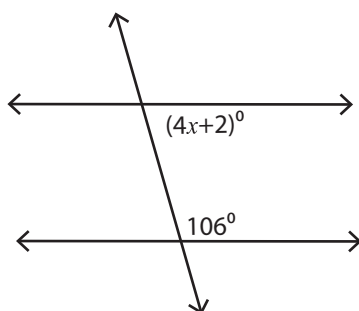


$x = \underline{11}$



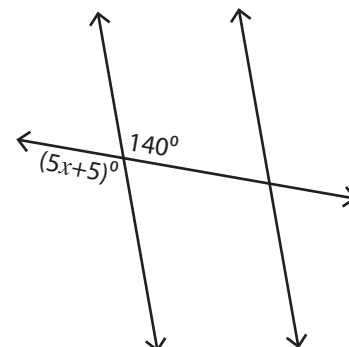
$x = \underline{35}$

7)



$x = \underline{18}$

8)



$x = \underline{27}$