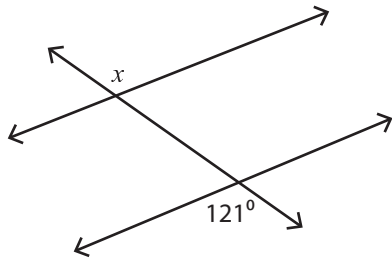


**Alternate & Same Side Angles**

Easy: S2

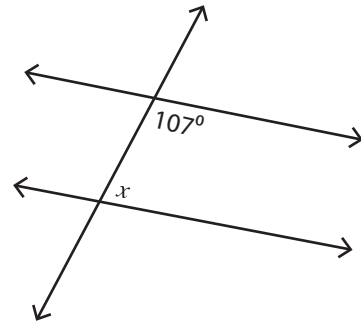
Find the value of  $x$ .

1)



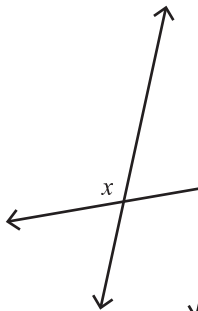
$x =$  \_\_\_\_\_

2)

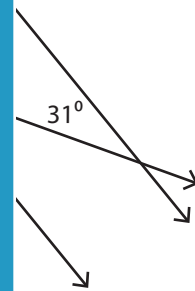


$x =$  \_\_\_\_\_

3)

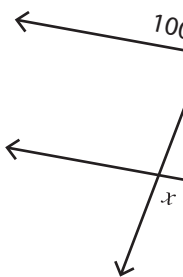


$x =$  \_\_\_\_\_

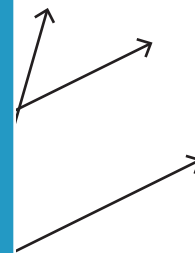


\_\_\_\_\_

5)



$x =$  \_\_\_\_\_



\_\_\_\_\_

# PREVIEW

Access the largest collection of  
worksheets for just **\$19.95** per year!

Members, please  
log in to  
download this  
worksheet.

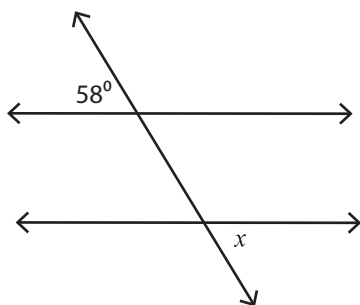
**Log in**

Not a member?  
Please sign up to  
gain complete  
access.

**Sign up**

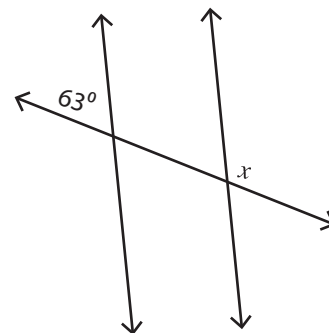
[www.mathworksheets4kids.com](http://www.mathworksheets4kids.com)

7)



$x =$  \_\_\_\_\_

8)



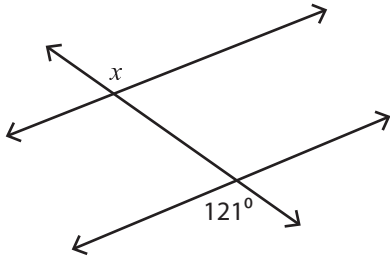
$x =$  \_\_\_\_\_

**Alternate & Same Side Angles**

Easy: S2

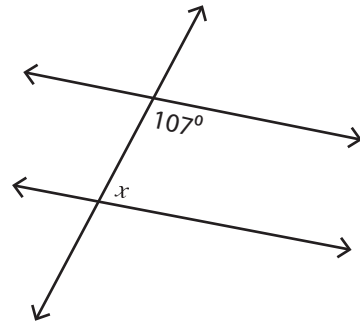
Find the value of  $x$ .

1)



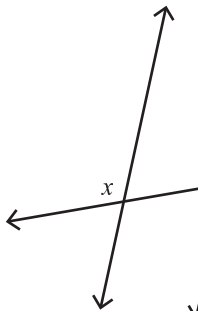
$x = 121^\circ$

2)

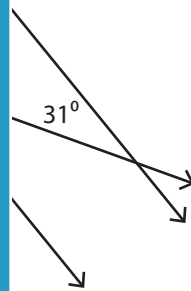


$x = 73^\circ$

3)

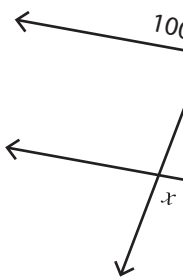


$x = 11$

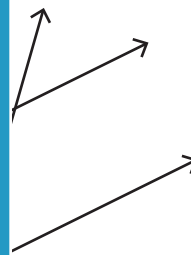


$31^\circ$

5)



$x = 10$



$17^\circ$

**PREVIEW**

Access the largest collection of worksheets for just **\$19.95** per year!

Members, please log in to download this worksheet.

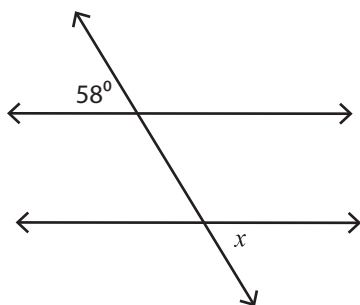
Log in

Not a member? Please sign up to gain complete access.

Sign up

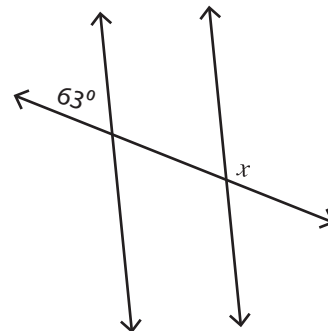
[www.mathworksheets4kids.com](http://www.mathworksheets4kids.com)

7)



$x = 58^\circ$

8)



$x = 117^\circ$