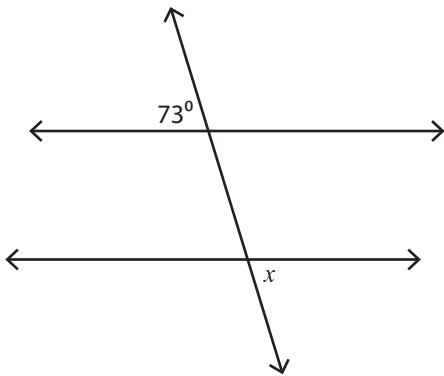


Alternate & Same Side Angles

Easy: S3

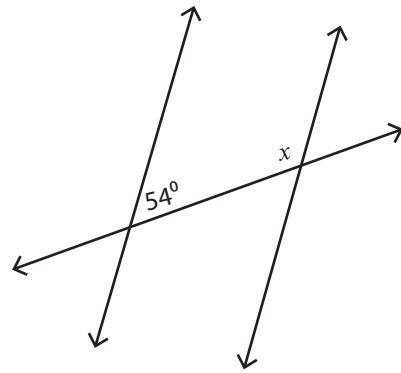
Find the value of x .

1)



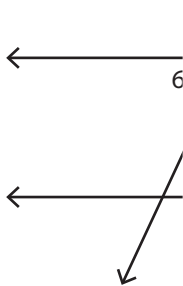
$x =$ _____

2)

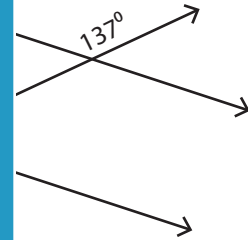


$x =$ _____

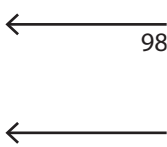
3)



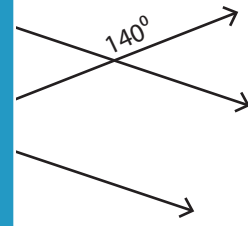
$x =$ _____



5)



$x =$ _____



PREVIEW

Access the largest collection of
worksheets for just **\$19.95** per year!

Members, please
log in to
download this
worksheet.

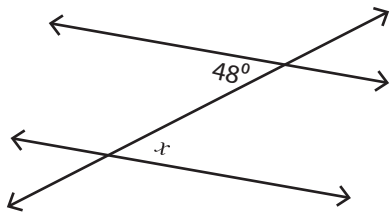
Log in

Not a member?
Please sign up to
gain complete
access.

Sign up

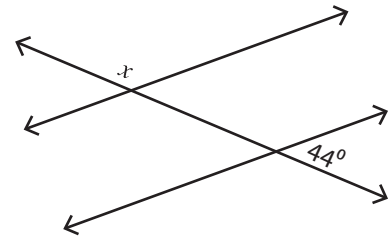
www.mathworksheets4kids.com

7)



$x =$ _____

8)



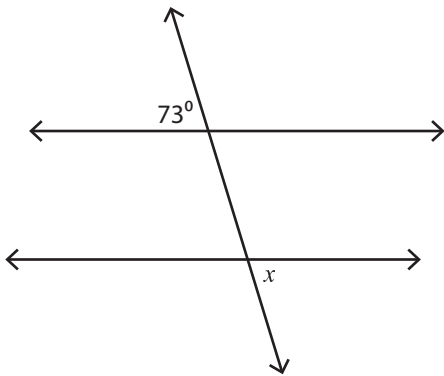
$x =$ _____

Alternate & Same Side Angles

Easy: S3

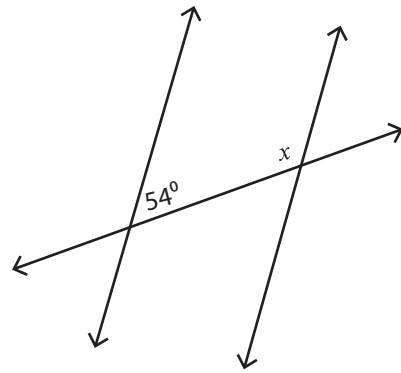
Find the value of x .

1)



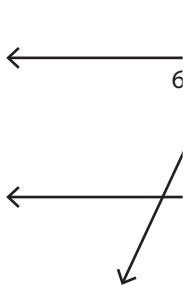
$x = 73^\circ$

2)

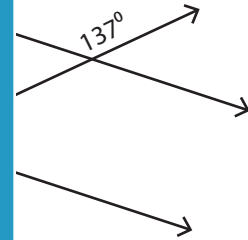


$x = 126^\circ$

3)

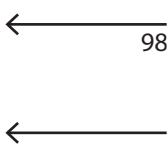


$x = 6^\circ$

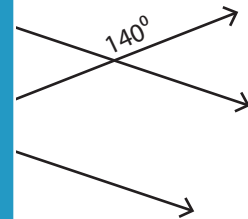


$x = 13^\circ$

5)



$x = 8^\circ$



$x = 40^\circ$

PREVIEW

Access the largest collection of worksheets for just **\$19.95** per year!

Members, please log in to download this worksheet.

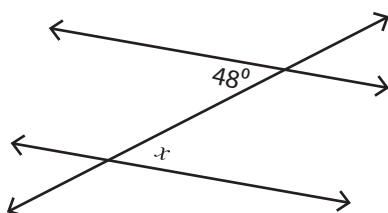
Log in

Not a member? Please sign up to gain complete access.

Sign up

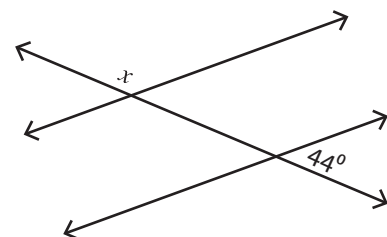
www.mathworksheets4kids.com

7)



$x = 48^\circ$

8)



$x = 136^\circ$