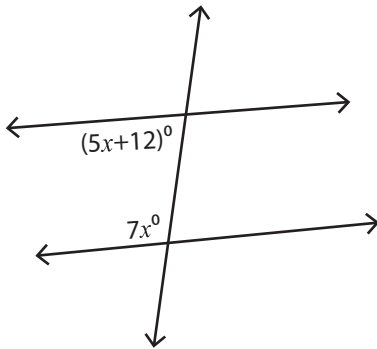


Alternate & Same Side Angles

Difficult: S3

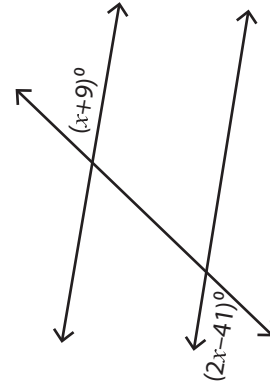
Find the value of x .

1)



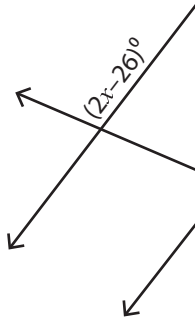
$x =$ _____

2)




$x =$ _____

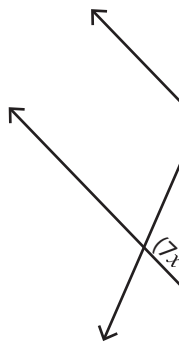
3)



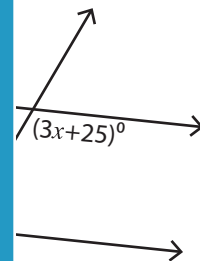
$x =$ _____



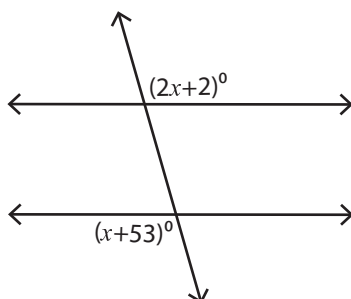
5)



$x =$ _____

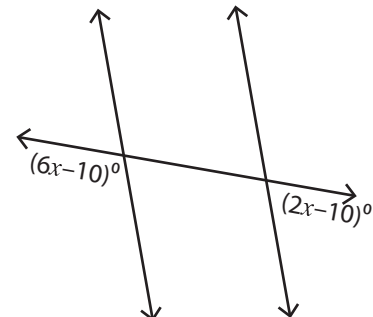


7)



$x =$ _____

8)



$x =$ _____

PREVIEW

Access the largest collection of
worksheets for just **\$19.95** per year!

Members, please
log in to
download this
worksheet.

Log in

Not a member?
Please sign up to
gain complete
access.

Sign up

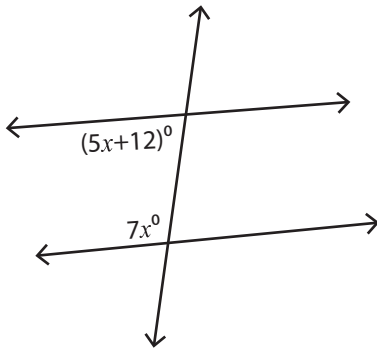
www.mathworksheets4kids.com

Alternate & Same Side Angles

Difficult: S3

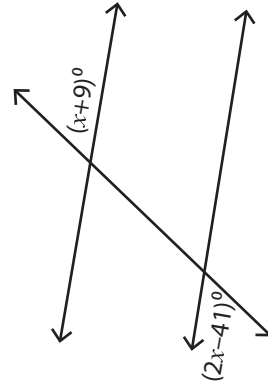
Find the value of x .

1)



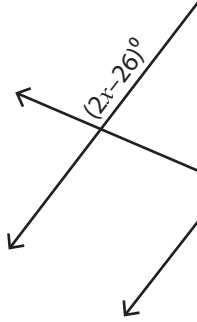
$x = \underline{14}$

2)




$x = \underline{50}$

3)

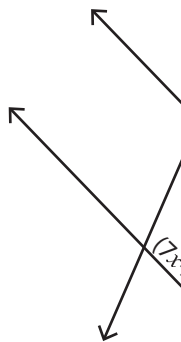


$x = \underline{6}$

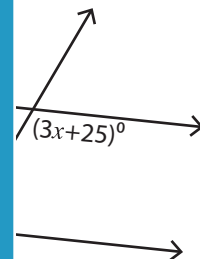


$\underline{15}$

5)



$x = \underline{1}$



$\underline{30}$

PREVIEW

Access the largest collection of worksheets for just **\$19.95** per year!

Members, please log in to download this worksheet.

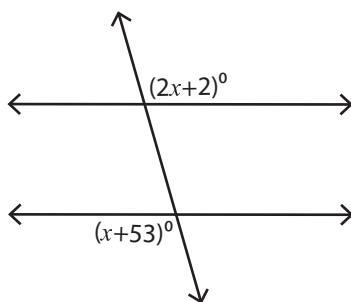
Log in

Not a member? Please sign up to gain complete access.

Sign up

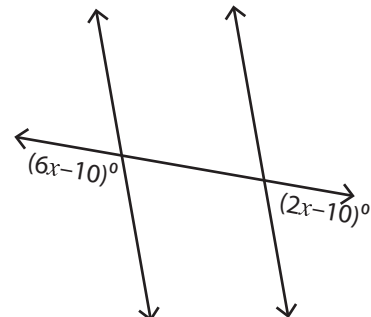
www.mathworksheets4kids.com

7)



$x = \underline{51}$

8)



$x = \underline{25}$