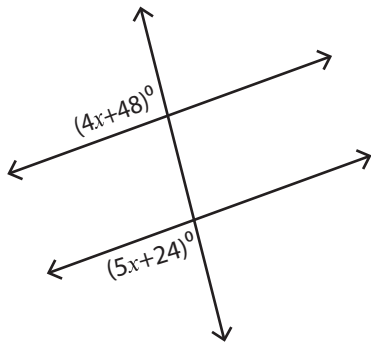


Exterior Angles

Difficult: S1

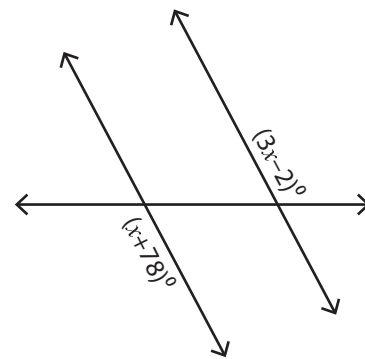
Find the value of x .

1)



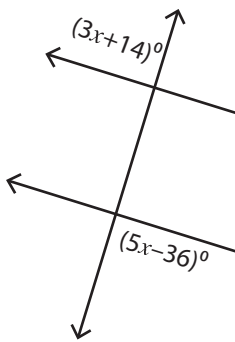
$x =$ _____

2)

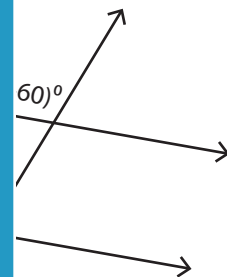


$x =$ _____

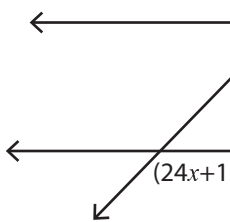
3)



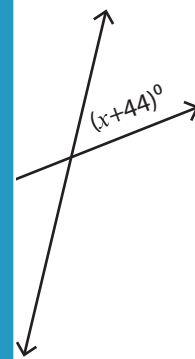
$x =$ _____



5)



$x =$ _____



PREVIEW

Access the largest collection of
worksheets for just **\$19.95** per year!

Members, please
log in to
download this
worksheet.

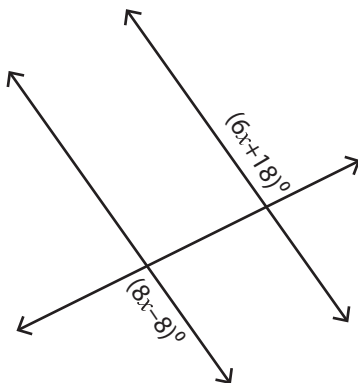
Log in

Not a member?
Please sign up to
gain complete
access.

Sign up

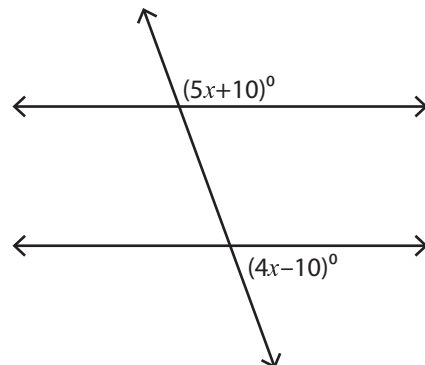
www.mathworksheets4kids.com

7)



$x =$ _____

8)



$x =$ _____

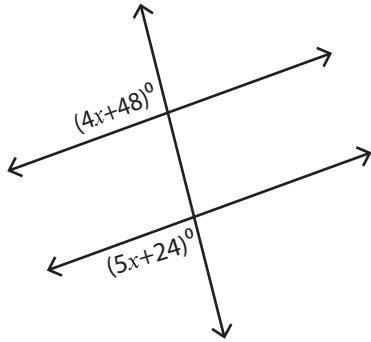
Answer Key

Exterior Angles

Difficult: S1

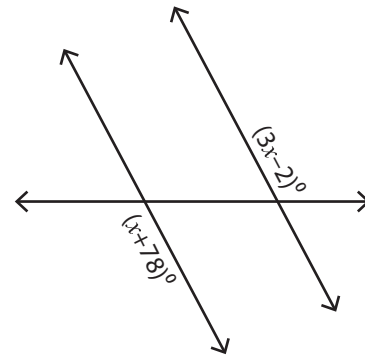
Find the value of x .

1)



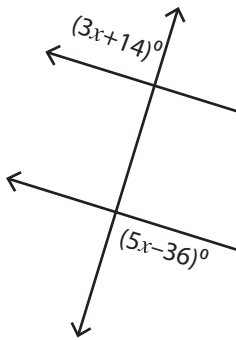
$x = \underline{12}$

2)

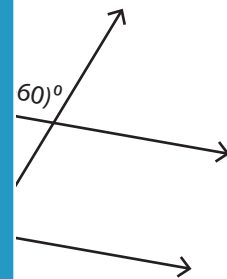


$x = \underline{40}$

3)

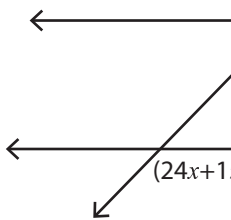


$x = \underline{2}$

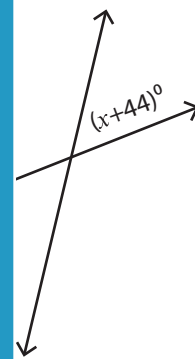


$x = \underline{10}$

5)



$x = \underline{5}$



$x = \underline{3}$

PREVIEW

Access the largest collection of worksheets for just **\$19.95** per year!

Members, please log in to download this worksheet.

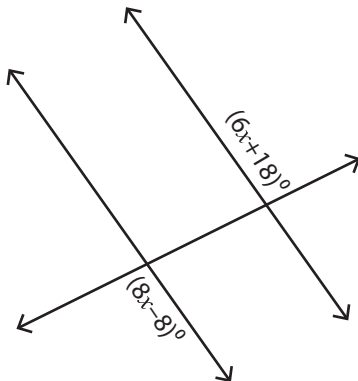
Log in

Not a member? Please sign up to gain complete access.

Sign up

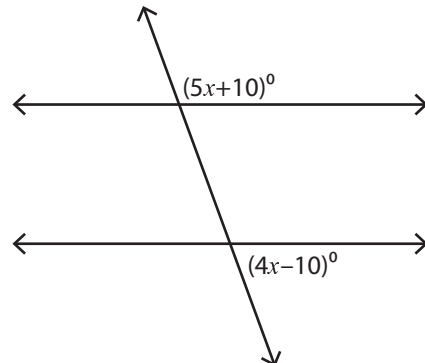
www.mathworksheets4kids.com

7)



$x = \underline{13}$

8)



$x = \underline{20}$