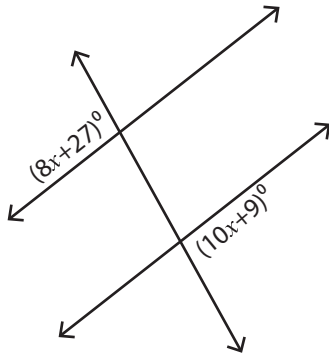


Exterior Angles

Difficult: S2

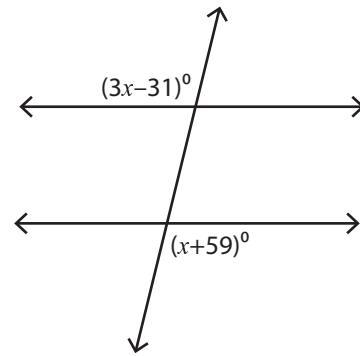
Find the value of x .

1)



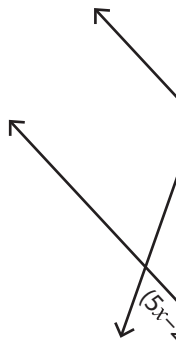
$x =$ _____

2)

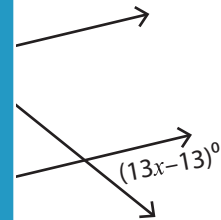


$x =$ _____

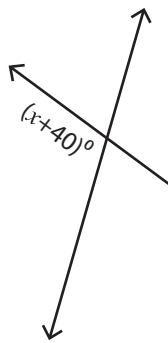
3)



$x =$ _____



5)



$x =$ _____



PREVIEW

Access the largest collection of
worksheets for just **\$19.95** per year!

Members, please
log in to
download this
worksheet.

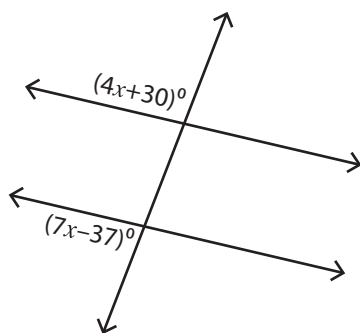
Log in

Not a member?
Please sign up to
gain complete
access.

Sign up

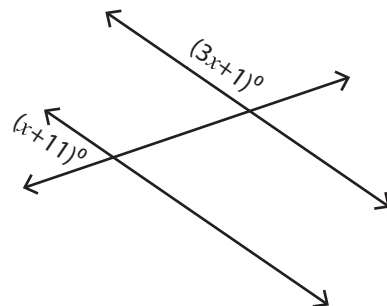
www.mathworksheets4kids.com

7)



$x =$ _____

8)



$x =$ _____

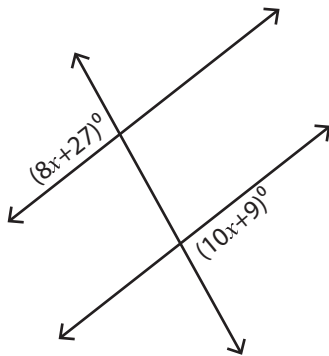
Answer Key

Exterior Angles

Difficult: S2

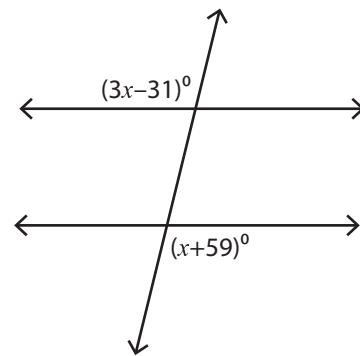
Find the value of x .

1)



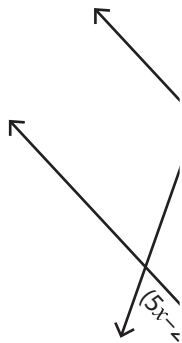
$x = \underline{9}$

2)



$x = \underline{45}$

3)



$x = \underline{11}$

PREVIEW

Access the largest collection of
worksheets for just **\$19.95** per year!

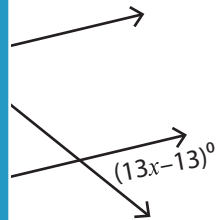
Members, please
log in to
download this
worksheet.

Log in

Not a member?
Please sign up to
gain complete
access.

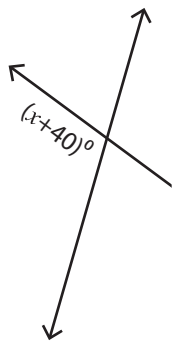
Sign up

www.mathworksheets4kids.com

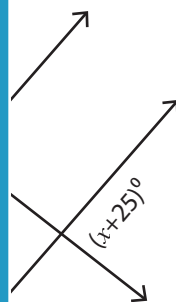


$x = \underline{5}$

5)

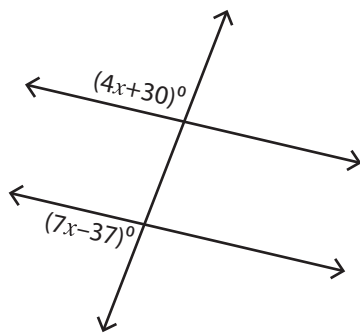


$x = \underline{30}$



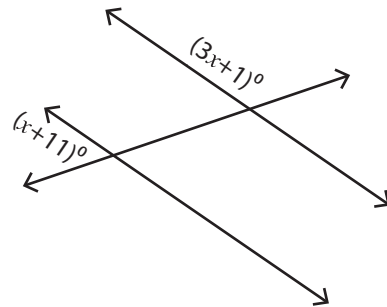
$x = \underline{52}$

7)



$x = \underline{17}$

8)



$x = \underline{42}$