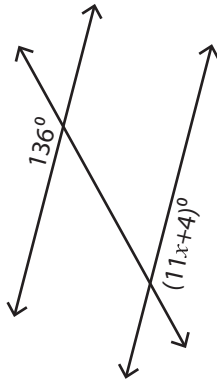


## Exterior Angles

Moderate: S1

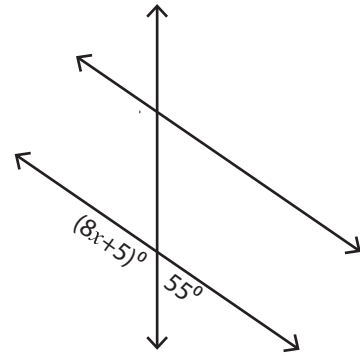
Find the value of  $x$ .

1)



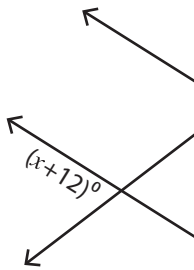
$x =$  \_\_\_\_\_

2)

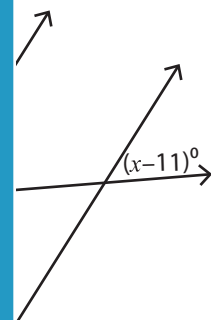


$x =$  \_\_\_\_\_

3)

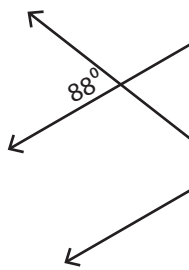


$x =$  \_\_\_\_\_

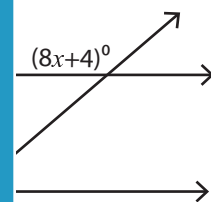


\_\_\_\_\_

5)



$x =$  \_\_\_\_\_



\_\_\_\_\_

# PREVIEW

Access the largest collection of worksheets for just **\$19.95** per year!

Members, please log in to download this worksheet.

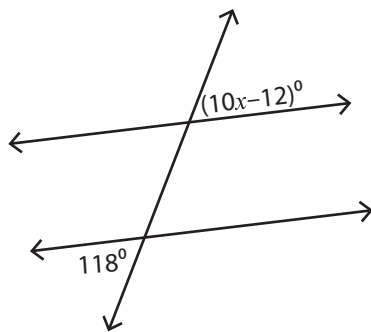
Log in

Not a member? Please sign up to gain complete access.

Sign up

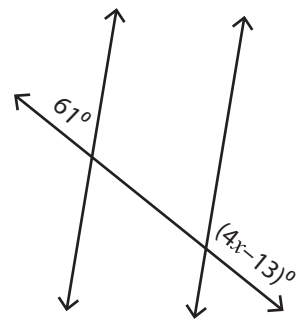
[www.mathworksheets4kids.com](http://www.mathworksheets4kids.com)

7)



$x =$  \_\_\_\_\_

8)



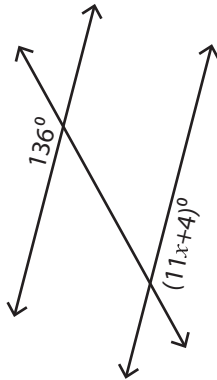
$x =$  \_\_\_\_\_

Exterior Angles

Moderate: S1

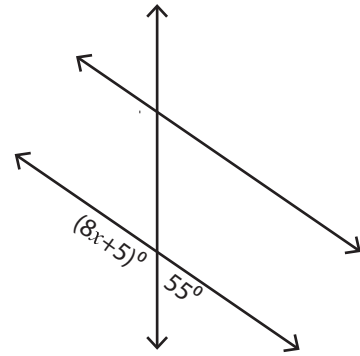
Find the value of  $x$ .

1)



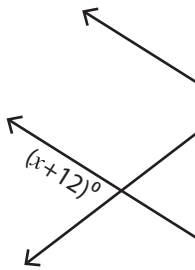
$x = 12$

2)

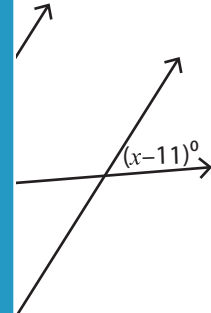


$x = 15$

3)

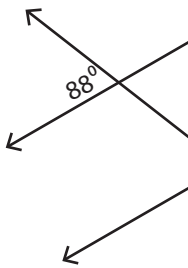


$x = 54$

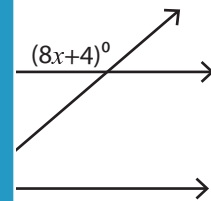


$54$

5)



$x = 21$



$17$

**PREVIEW**

Access the largest collection of worksheets for just **\$19.95** per year!

Members, please log in to download this worksheet.

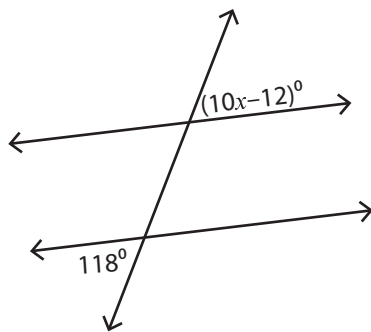
Log in

Not a member? Please sign up to gain complete access.

Sign up

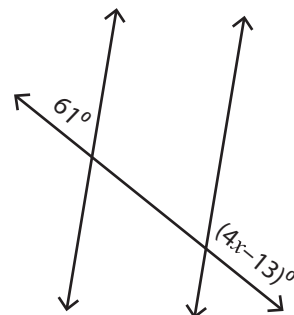
[www.mathworksheets4kids.com](http://www.mathworksheets4kids.com)

7)



$x = 13$

8)



$x = 33$