

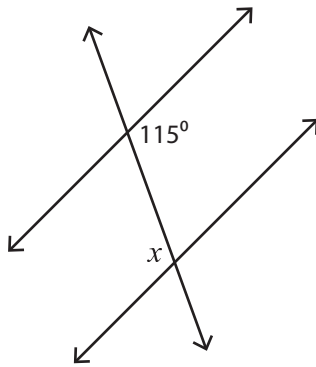
Name : _____

Interior Angles

ES2

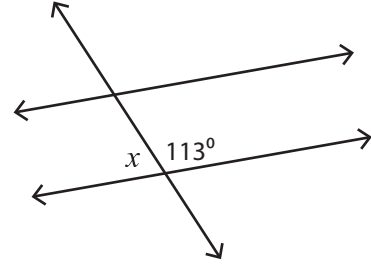
Find the value of each indicated angle.

1)



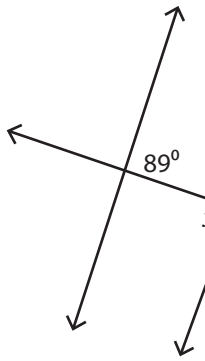
$x =$ _____

2)



$x =$ _____

3)



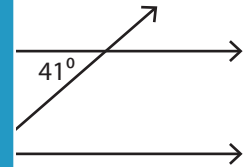
$x =$ _____

PREVIEW
Gain complete access to the largest collection of worksheets in all subjects!

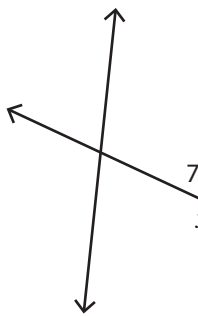
Members, please log in to download this worksheet.

Not a member? Please sign up to gain complete access.

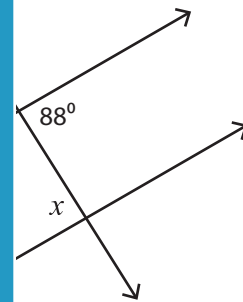
www.mathworksheets4kids.com



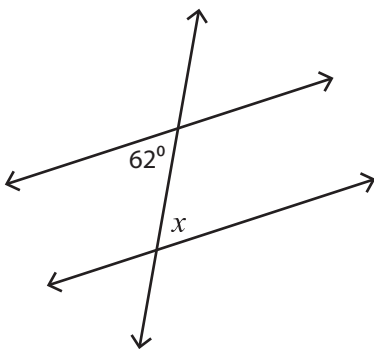
5)



$x =$ _____

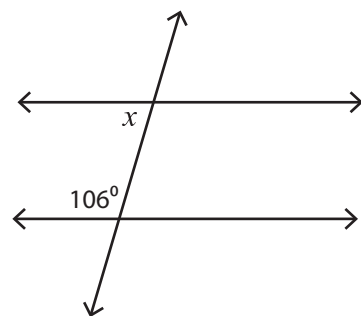


7)



$x =$ _____

8)



$x =$ _____

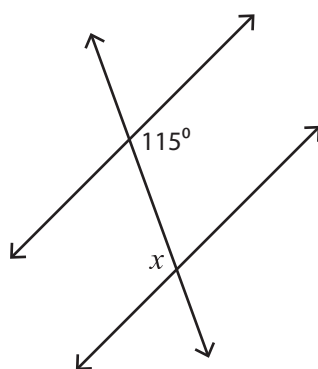
Name : _____

Interior Angles

ES2

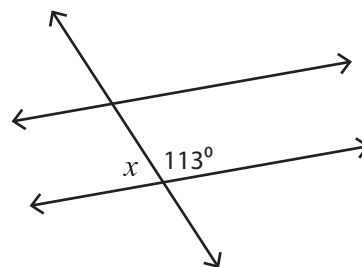
Find the value of each indicated angle.

1)



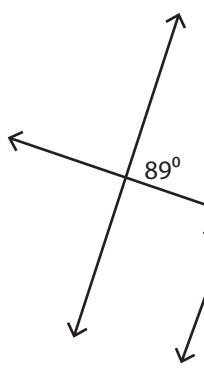
$x = 115^\circ$

2)

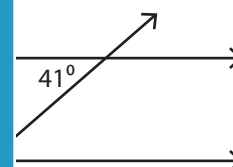


$x = 67^\circ$

3)

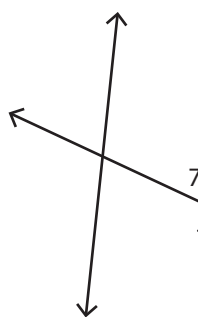


$x = 89^\circ$

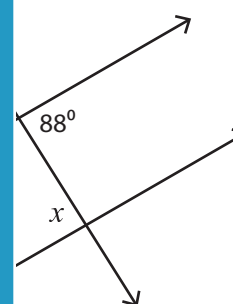


$x = 139^\circ$

5)



$x = 110^\circ$



$x = 88^\circ$

PREVIEW

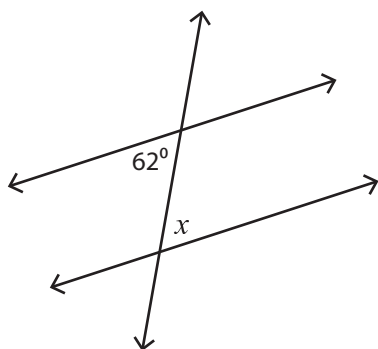
Gain complete access to the largest collection of worksheets in all subjects!

Members, please log in to download this worksheet.

Not a member? Please sign up to gain complete access.

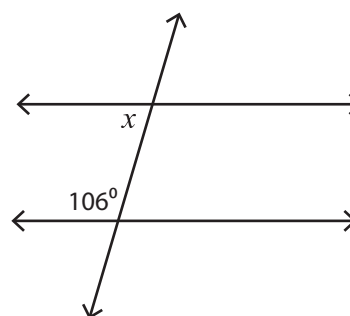
www.mathworksheets4kids.com

7)



$x = 62^\circ$

8)



$x = 74^\circ$