

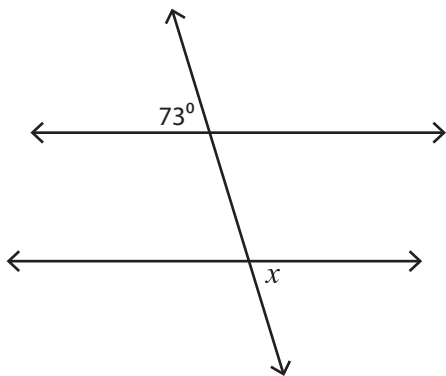
Name : _____

Interior and Exterior Angles

ES3

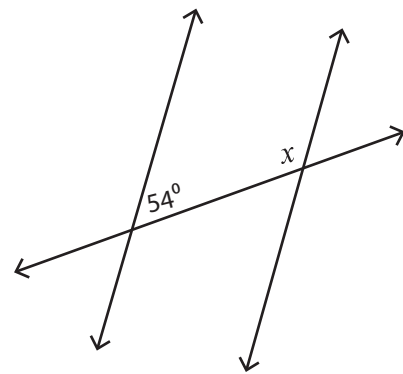
Find the value of each indicated angle.

1)



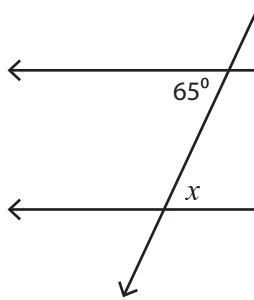
$x =$ _____

2)



$x =$ _____

3)



$x =$ _____

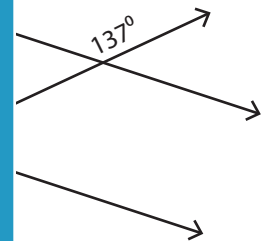
PREVIEW

Gain complete access to the largest collection of worksheets in all subjects!

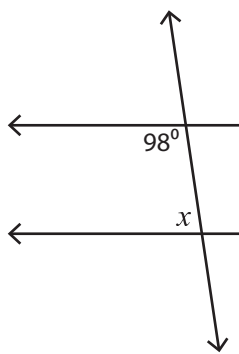
Members, please log in to download this worksheet.

Not a member? Please sign up to gain complete access.

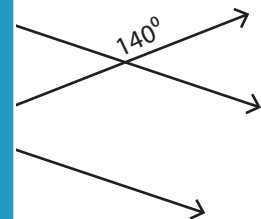
www.mathworksheets4kids.com



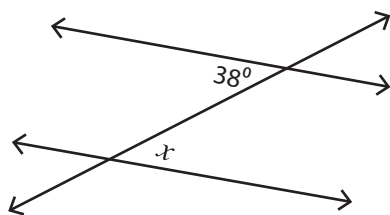
5)



$x =$ _____

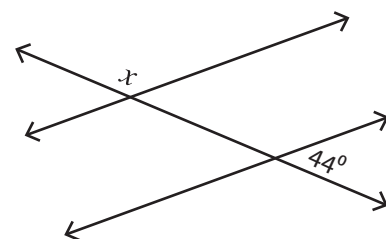


7)



$x =$ _____

8)



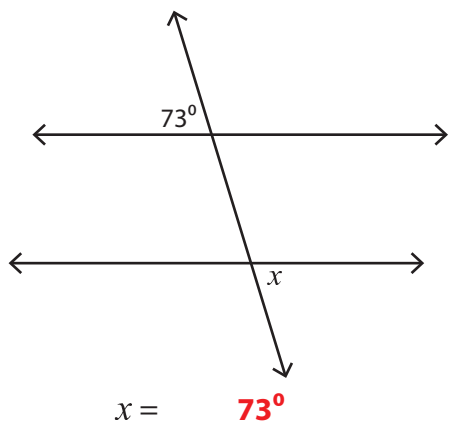
$x =$ _____

Name : _____

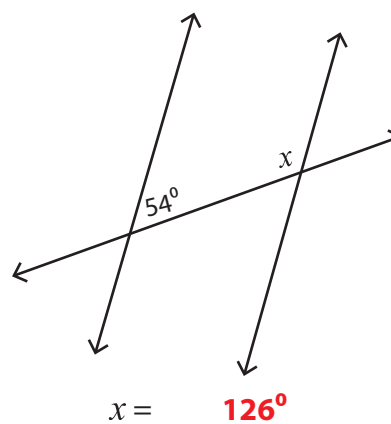
Interior and Exterior Angles

Find the value of each indicated angle.

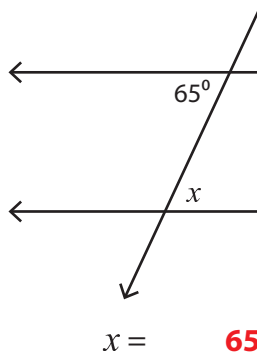
1)



2)



3)



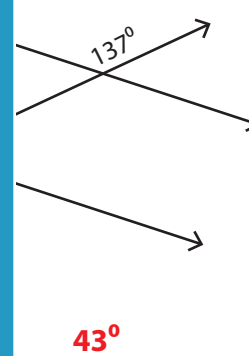
PREVIEW

Gain complete access to the largest collection of worksheets in all subjects!

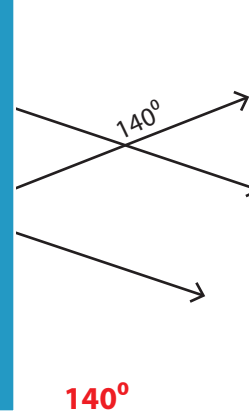
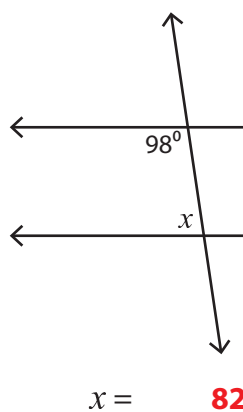
Members, please log in to download this worksheet.

Not a member? Please sign up to gain complete access.

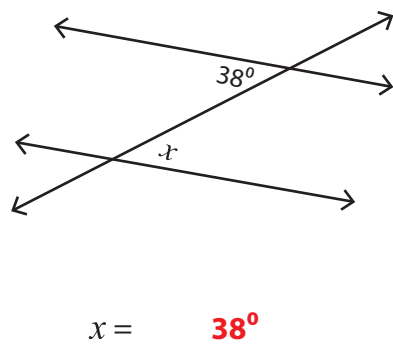
www.mathworksheets4kids.com



5)



7)



8)

