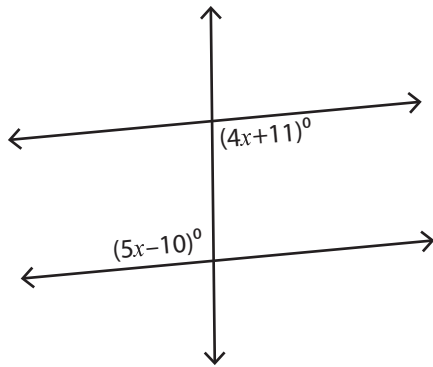


# Interior Angles

Difficult: S1

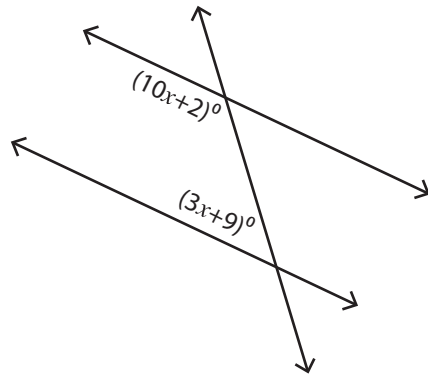
Find the value of  $x$ .

1)



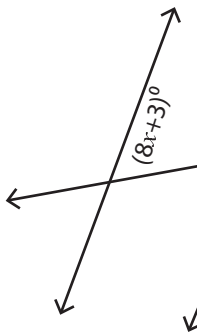
$x =$  \_\_\_\_\_

2)

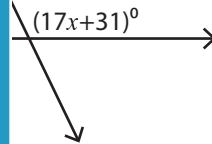


$x =$  \_\_\_\_\_

3)

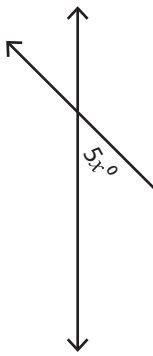


$x =$  \_\_\_\_\_

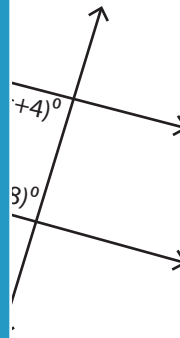


\_\_\_\_\_

5)



$x =$  \_\_\_\_\_



\_\_\_\_\_

## PREVIEW

Access the largest collection of  
worksheets for just **\$19.95** per year!

Members, please  
log in to  
download this  
worksheet.

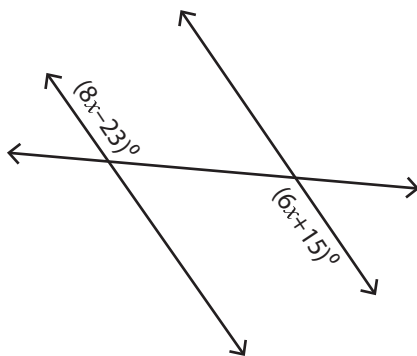
Log in

Not a member?  
Please sign up to  
gain complete  
access.

Sign up

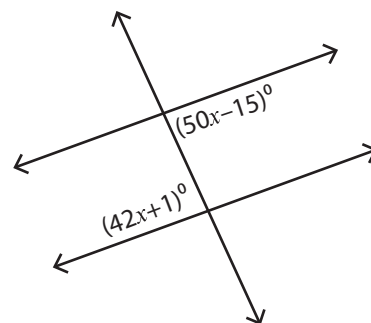
www.mathworksheets4kids.com

7)



$x =$  \_\_\_\_\_

8)



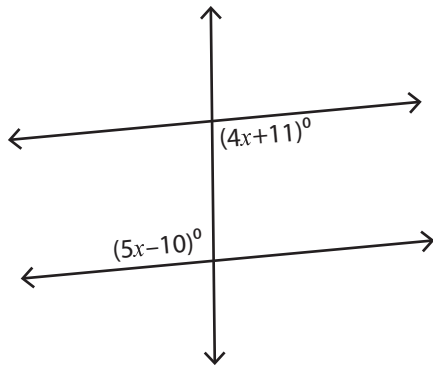
$x =$  \_\_\_\_\_

**Interior Angles**

Difficult: S1

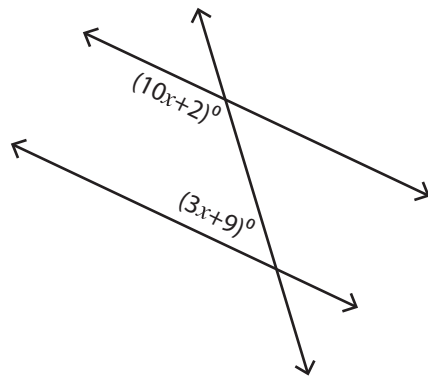
Find the value of  $x$ .

1)



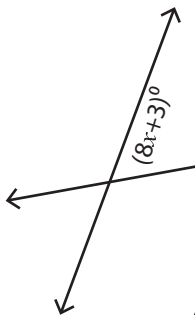
$x = \underline{21}$

2)



$x = \underline{13}$

3)



$x = \underline{7}$

# PREVIEW

Access the largest collection of worksheets for just **\$19.95** per year!

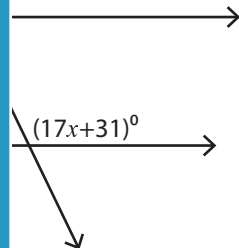
Members, please log in to download this worksheet.

Log in

Not a member? Please sign up to gain complete access.

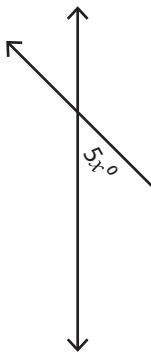
Sign up

[www.mathworksheets4kids.com](http://www.mathworksheets4kids.com)

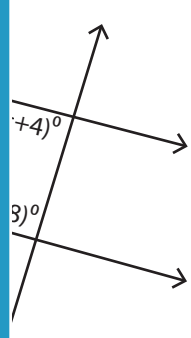


$x = \underline{5}$

5)

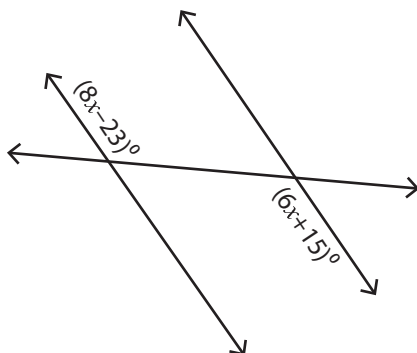


$x = \underline{9}$



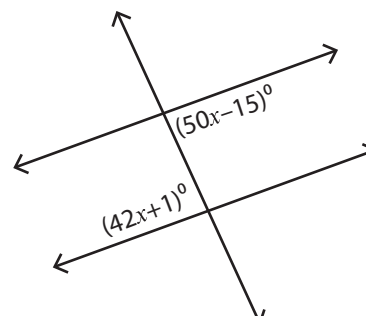
$x = \underline{12}$

7)



$x = \underline{19}$

8)



$x = \underline{2}$