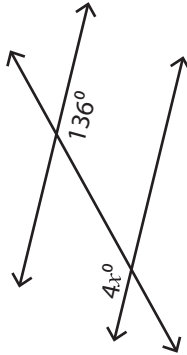


# Interior Angles

Moderate: S1

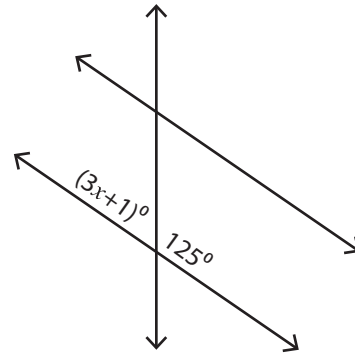
Find the value of  $x$ .

1)



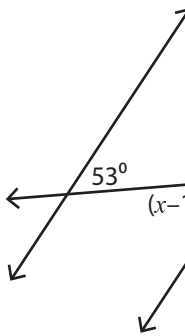
$x =$  \_\_\_\_\_

2)

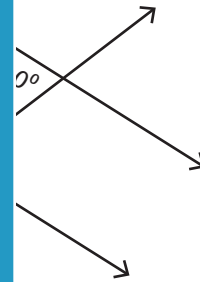


$x =$  \_\_\_\_\_

3)

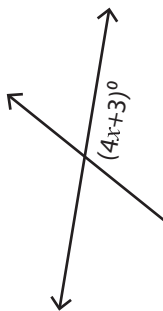


$x =$  \_\_\_\_\_

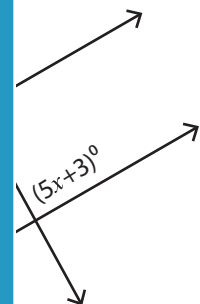


\_\_\_\_\_

5)



$x =$  \_\_\_\_\_



\_\_\_\_\_

## PREVIEW

Access the largest collection of  
worksheets for just **\$19.95** per year!

Members, please  
log in to  
download this  
worksheet.

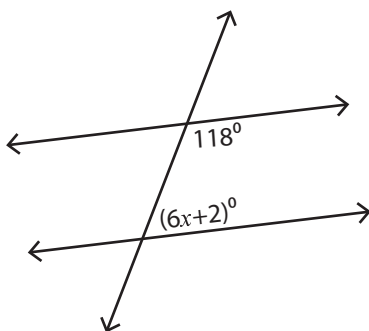
**Log in**

Not a member?  
Please sign up to  
gain complete  
access.

**Sign up**

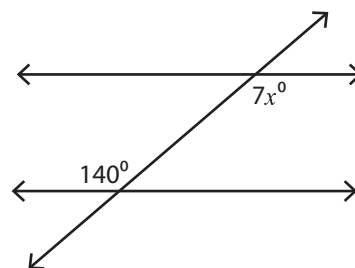
[www.mathworksheets4kids.com](http://www.mathworksheets4kids.com)

7)



$x =$  \_\_\_\_\_

8)



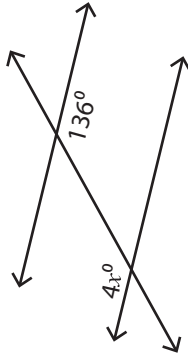
$x =$  \_\_\_\_\_

**Interior Angles**

Moderate: S1

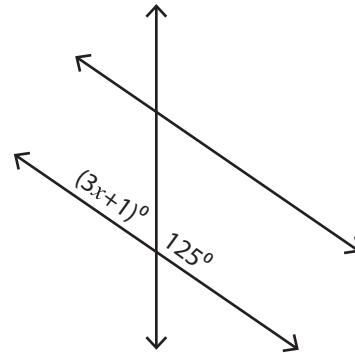
Find the value of  $x$ .

1)



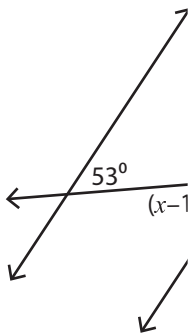
$x = \underline{34}$

2)



$x = \underline{18}$

3)



$x = \underline{6}$

**PREVIEW**

Access the largest collection of worksheets for just **\$19.95** per year!

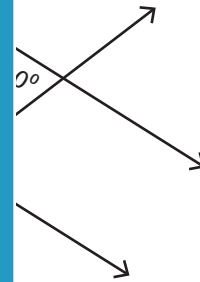
Members, please log in to download this worksheet.

**Log in**

Not a member? Please sign up to gain complete access.

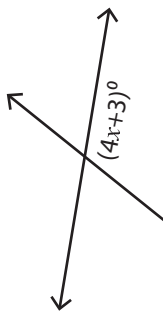
**Sign up**

[www.mathworksheets4kids.com](http://www.mathworksheets4kids.com)

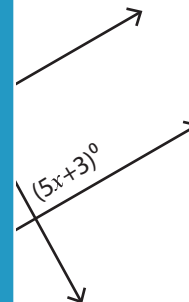


$x = \underline{58}$

5)

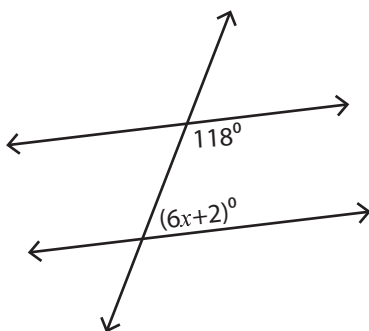


$x = \underline{21}$



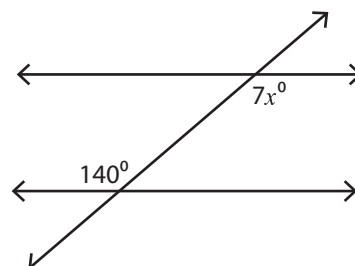
$x = \underline{17}$

7)



$x = \underline{10}$

8)



$x = \underline{20}$