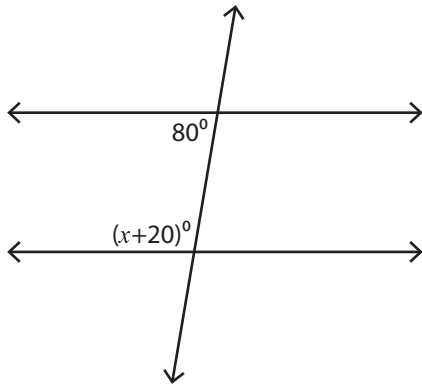


# Interior Angles

Moderate: S2

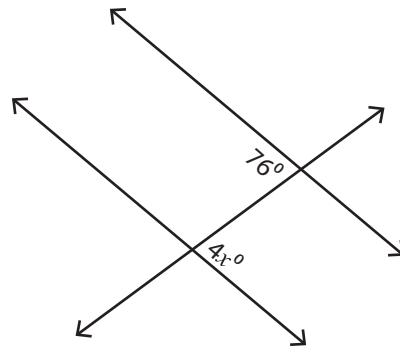
Find the value of  $x$ .

1)



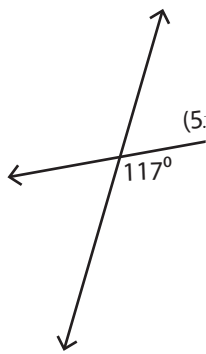
$x =$  \_\_\_\_\_

2)



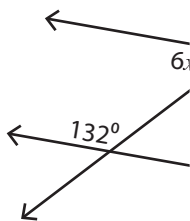
$x =$  \_\_\_\_\_

3)



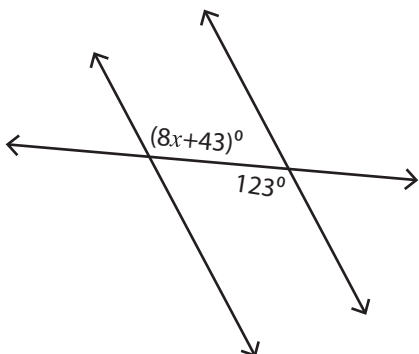
$x =$  \_\_\_\_\_

5)



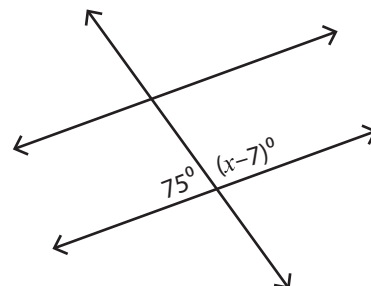
$x =$  \_\_\_\_\_

7)



$x =$  \_\_\_\_\_

8)



$x =$  \_\_\_\_\_

## PREVIEW

Access the largest collection of worksheets for just **\$19.95** per year!

Members, please  
log in to  
download this  
worksheet.

Log in

Not a member?  
Please sign up to  
gain complete  
access.

Sign up

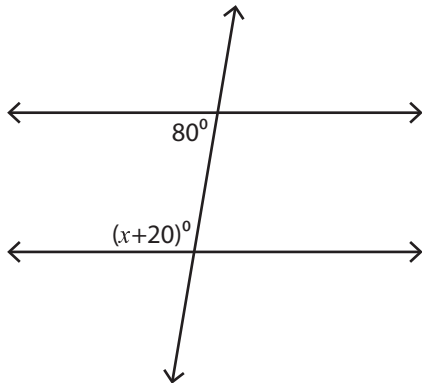
[www.mathworksheets4kids.com](http://www.mathworksheets4kids.com)

**Interior Angles**

Moderate: S2

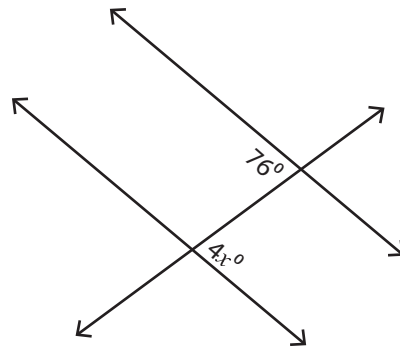
Find the value of  $x$ .

1)



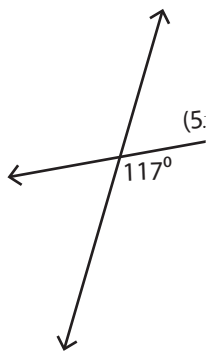
$x = \underline{80}$

2)



$x = \underline{19}$

3)



$x = \underline{27}$

**PREVIEW**

Access the largest collection of worksheets for just **\$19.95** per year!

Members, please log in to download this worksheet.

**Log in**

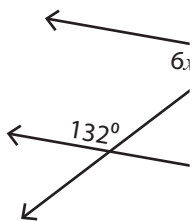
Not a member? Please sign up to gain complete access.

**Sign up**

[www.mathworksheets4kids.com](http://www.mathworksheets4kids.com)

$x = \underline{77}$

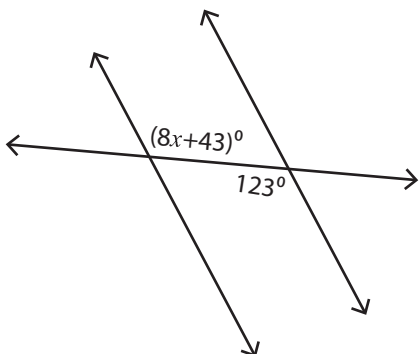
5)



$x = \underline{88}$

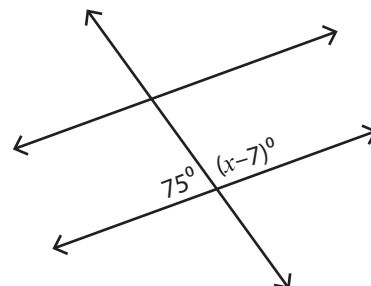
$x = \underline{13}$

7)



$x = \underline{10}$

8)



$x = \underline{112}$