

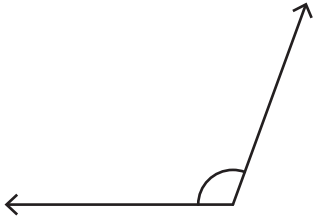
Name : _____

Identifying the Types of Angles

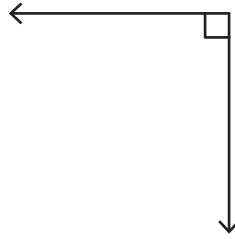
T1S2

Identify each angle as acute, right, obtuse, straight, or reflex.

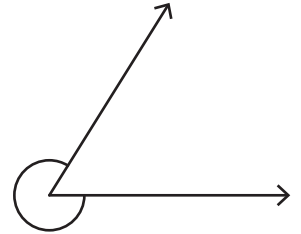
1)



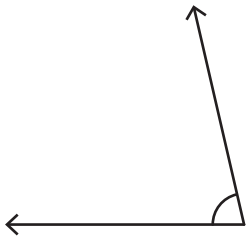
2)



3)

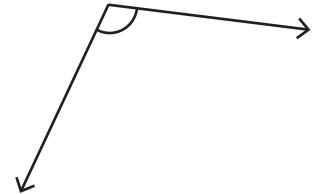


4)

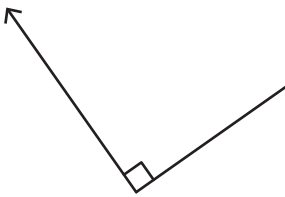


PREVIEW

Gain complete access to the largest collection of worksheets in all subjects!



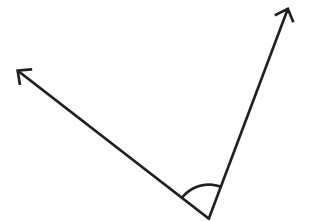
7)



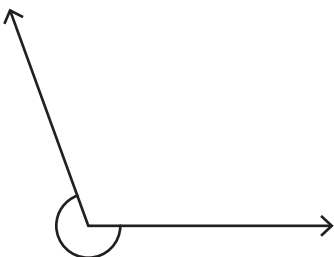
Members, please log in to download this worksheet.

Not a member? Please sign up to gain complete access.

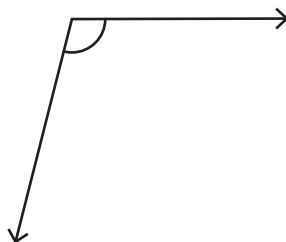
www.mathworksheets4kids.com



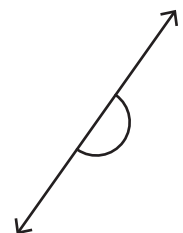
10)



11)



12)

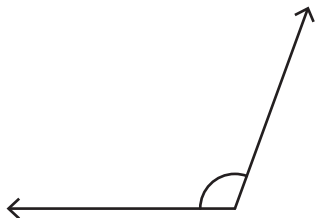


Name : _____

Identifying the Types of Angles

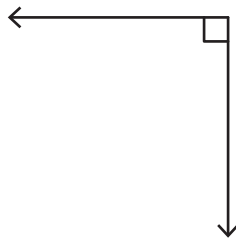
Identify each angle as acute, right, obtuse, straight, or reflex.

1)



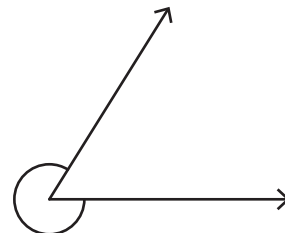
Obtuse angle

2)



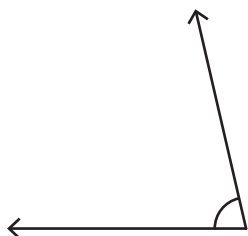
Right angle

3)



Reflex angle

4)



Acute angle

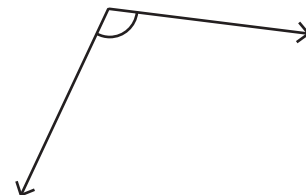
PREVIEW

Gain complete access to the largest collection of worksheets in all subjects!

Members, please log in to download this worksheet.

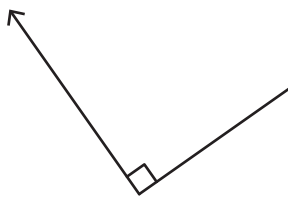
Not a member? Please sign up to gain complete access.

www.mathworksheets4kids.com

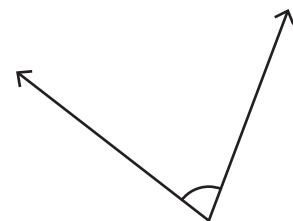


Obtuse angle

7)

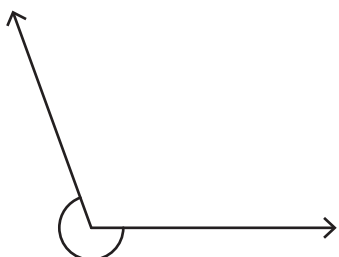


Right angle



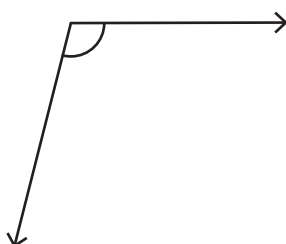
Acute angle

10)



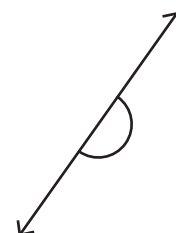
Reflex angle

11)



Obtuse angle

12)



Straight angle