

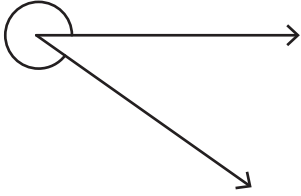
Name : _____

Identifying the Types of Angles

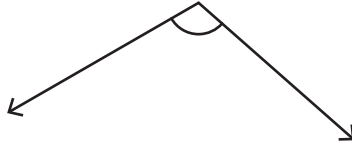
T1S4

Identify each angle as acute, right, obtuse, straight, or reflex.

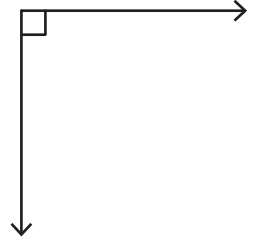
1)



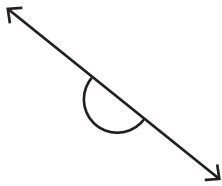
2)



3)

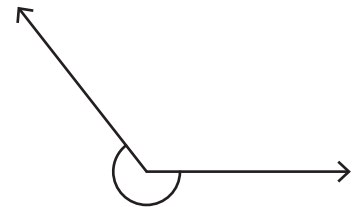


4)




PREVIEW

Gain complete access to the largest collection of worksheets in all subjects!



7)



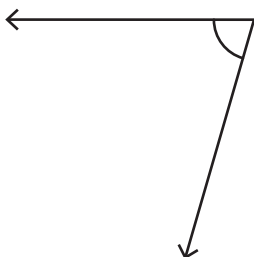
Members, please log in to download this worksheet.

Not a member? Please sign up to gain complete access.

www.mathworksheets4kids.com



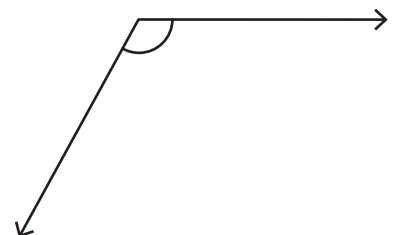
10)



11)



12)

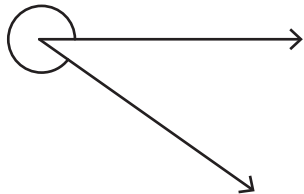


Name : _____

Identifying the Types of Angles

Identify each angle as acute, right, obtuse, straight, or reflex.

1)



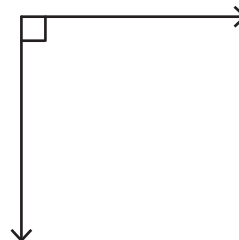
Reflex angle

2)



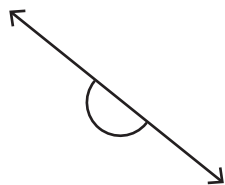
Obtuse angle

3)



Right angle

4)



Straight angle

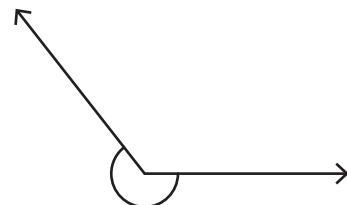
PREVIEW

Gain complete access to the largest collection of worksheets in all subjects!

Members, please log in to download this worksheet.

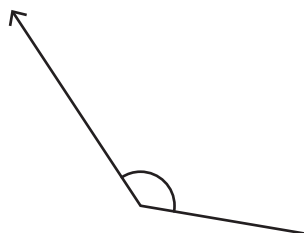
Not a member? Please sign up to gain complete access.

www.mathworksheets4kids.com



Reflex angle

7)

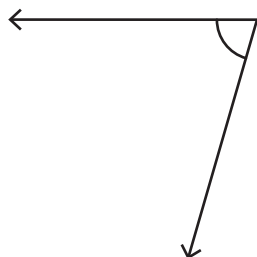


Obtuse angle



Straight angle

10)



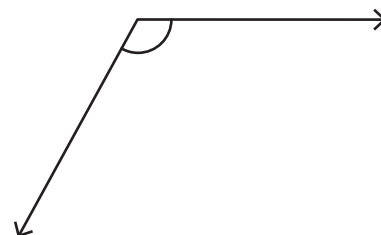
Acute angle

11)



Reflex angle

12)



Obtuse angle