

Name : _____

Identifying the Types of Angles

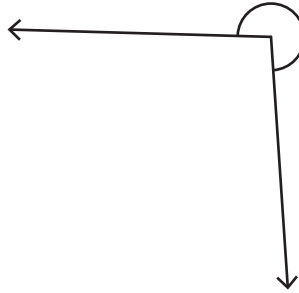
T1S5

Identify each angle as acute, right, obtuse, straight, or reflex.

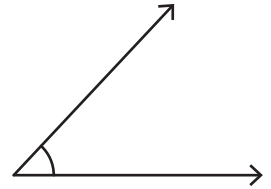
1)



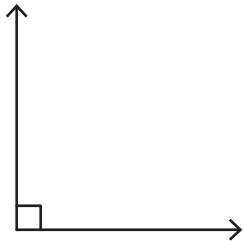
2)



3)



4)

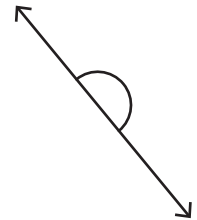


PREVIEW
Gain complete access to the largest collection of worksheets in all subjects!

Members, please log in to download this worksheet.

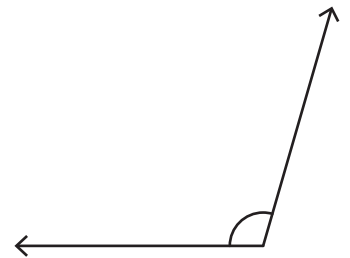
Not a member? Please sign up to gain complete access.

www.mathworksheets4kids.com

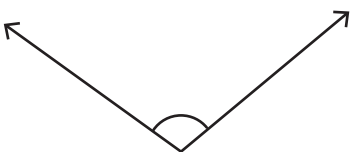


7)

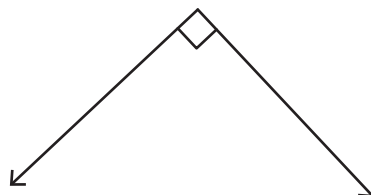




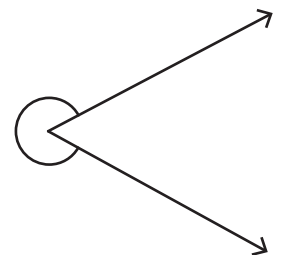
10)



11)



12)



Name : _____

Identifying the Types of Angles

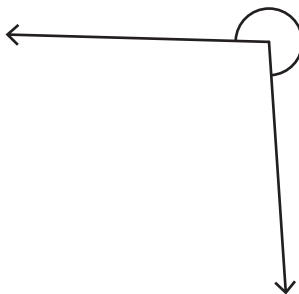
Identify each angle as acute, right, obtuse, straight, or reflex.

1)



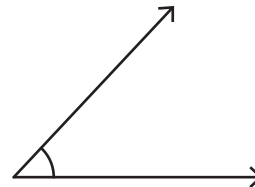
Straight angle

2)



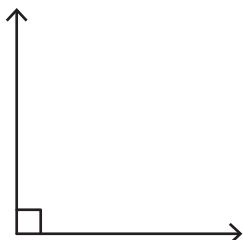
Reflex angle

3)



Acute angle

4)



Right angle

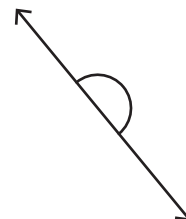
PREVIEW

Gain complete access to the largest collection of worksheets in all subjects!

Members, please log in to download this worksheet.

Not a member? Please sign up to gain complete access.

www.mathworksheets4kids.com

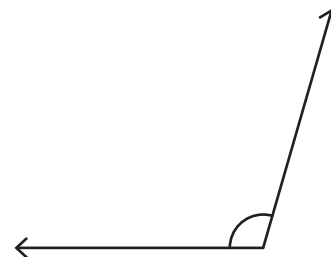


Straight angle

7)

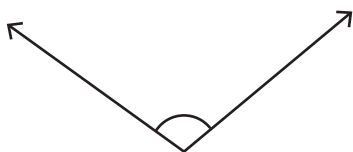


Reflex angle



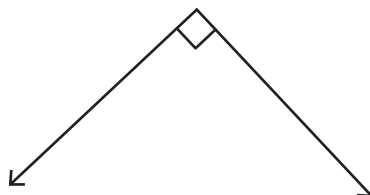
Obtuse angle

10)



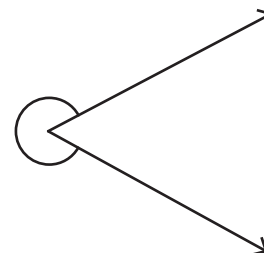
Obtuse angle

11)



Right angle

12)



Reflex angle