

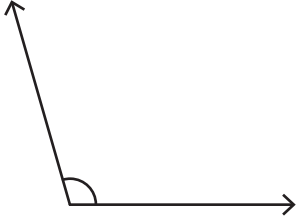
Name : _____

Identifying the Types of Angles

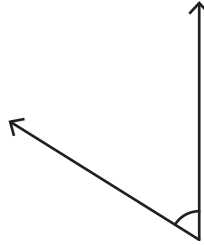
T2S1

A) Identify each angle as acute, right, obtuse, straight, or reflex.

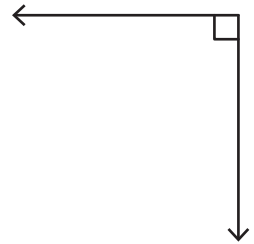
1)



2)



3)



B) Identify the type of each angle.

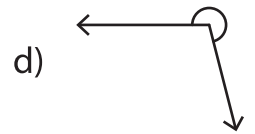
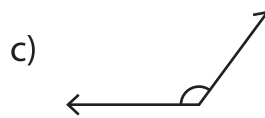
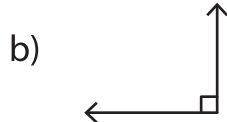
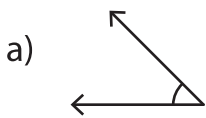
1) 293°

2) 115°

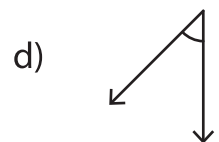
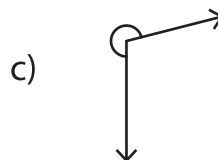
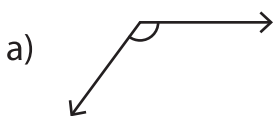
3) 180°

4) 79°

C) 1) Which of the following is an acute angle?



2) Which of the following is a reflex angle?



3) Which of the following is a straight angle?

