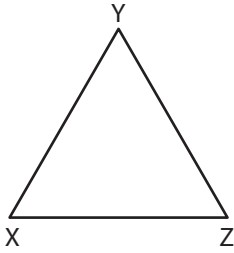


# Types of Angles - Shapes

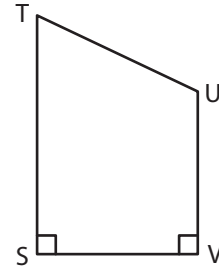
Identify the type of each indicated angle.

1)



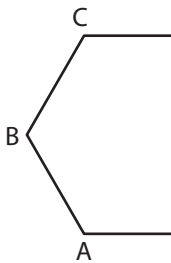
$\angle XYZ$ : \_\_\_\_\_

2)

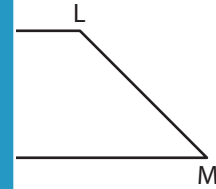


$\angle UVS$ : \_\_\_\_\_

3)

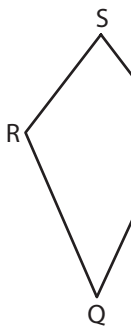


$\angle CDE$ : \_\_\_\_\_



\_\_\_\_\_

5)

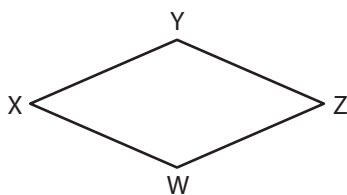


$\angle RST$ : \_\_\_\_\_



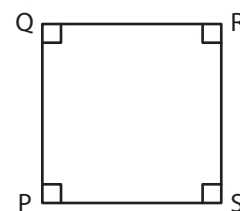
\_\_\_\_\_

7)



$\angle XWZ$ : \_\_\_\_\_

8)



$\angle PSR$ : \_\_\_\_\_

## PREVIEW

Gain complete access to the largest collection of worksheets in all subjects!

Members, please log in to download this worksheet.

Not a member? Please sign up to gain complete access.

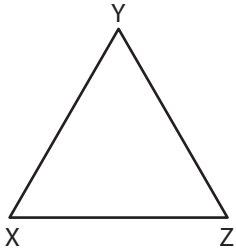
[www.mathworksheets4kids.com](http://www.mathworksheets4kids.com)

Name : \_\_\_\_\_

**Types of Angles - Shapes**

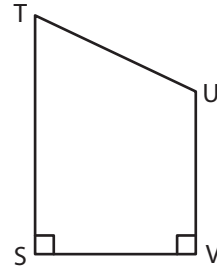
Identify the type of each indicated angle.

1)



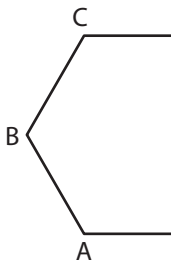
$\angle XYZ$ : Acute angle

2)

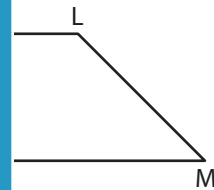


$\angle UVS$ : Right angle

3)

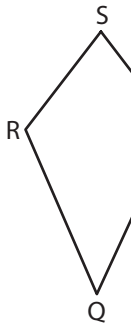


$\angle CDE$ : Obtuse angle



$\angle LMN$ : Acute angle

5)

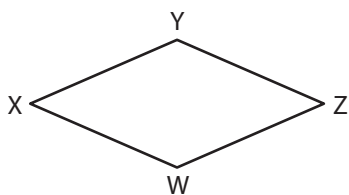


$\angle RST$ : Acute angle



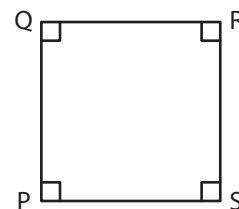
$\angle FGH$ : Obtuse angle

7)



$\angle XWZ$ : Obtuse angle

8)



$\angle PSR$ : Right angle

**PREVIEW**

Gain complete access to the largest collection of worksheets in all subjects!

Members, please log in to download this worksheet.

Not a member? Please sign up to gain complete access.

[www.mathworksheets4kids.com](http://www.mathworksheets4kids.com)