

Name : _____

Types of Angles - Revision

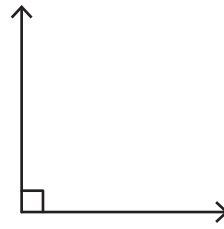
T1S2

A) Identify each angle as acute, right, obtuse, straight, or reflex.

1)

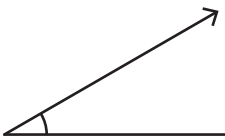


2)



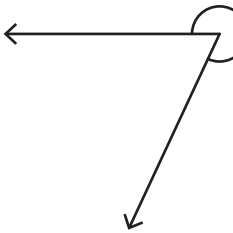
B) 1) Which of the following is an acute angle?

a)



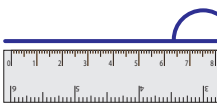
2) Which of the following

a)



C) Identify the type of each

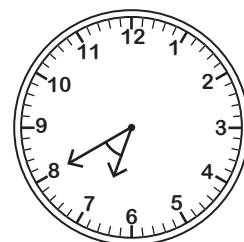
1)



2)



2)



PREVIEW


Gain complete access to the largest collection of worksheets in all subjects!

Members, please log in to download this worksheet.

Not a member? Please sign up to gain complete access.

www.mathworksheets4kids.com

of angle formed by the clock.



Name : _____

Types of Angles - Revision

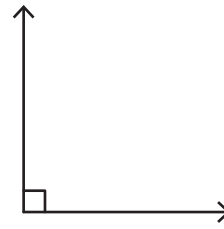
A) Identify each angle as acute, right, obtuse, straight, or reflex.

1)



Straight angle

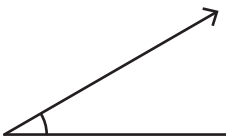
2)



Right angle


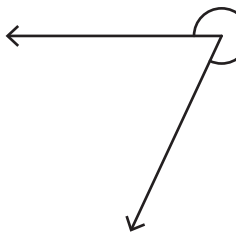
B) 1) Which of the following is an acute angle?

a) ✓



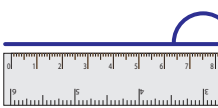
2) Which of the following is an obtuse angle?

a)



C) Identify the type of each angle.

1)



Straight angle

2)



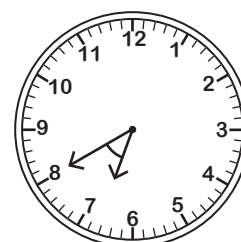
Obtuse angle

of angle formed by the clock.



Right angle

2)



Acute angle

PREVIEW

Gain complete access to the largest collection of worksheets in all subjects!

Members, please log in to download this worksheet.

Not a member? Please sign up to gain complete access.

www.mathworksheets4kids.com