



# Drawing Shapes


 = 1 square unit

Draw any shape in each grid with the following area.


1) Area = 18 square units




2) Area = 26 square units



3) Area = 17 square units

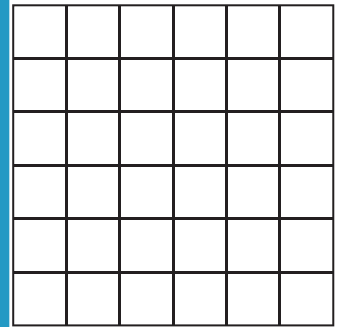


4) Area = 12 square units




5) Area = 20 square units

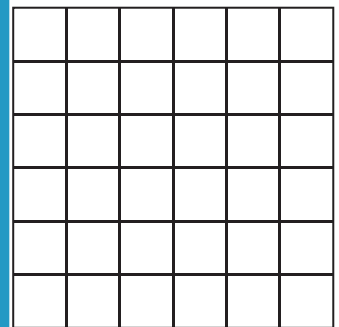
6) Area = 22 square units



7) Area = 19 square units



Area = 15 square units



**PREVIEW**

Gain complete access to the largest collection of worksheets in all subjects!


Members, please log in to download this worksheet.

Not a member? Please sign up to gain complete access.


[www.mathworksheets4kids.com](http://www.mathworksheets4kids.com)

Draw 3 different shapes in each grid.

10)



11)



12)

