



Drawing Shapes


 = 1 square unit

Draw any shape in each grid with the following area.


1) Area = 13 square units




2) Area = 32 square units



3) Area = 14 square units



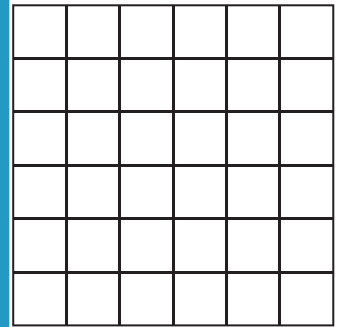
4) Area = 33 square units




5) Area = 19 square units



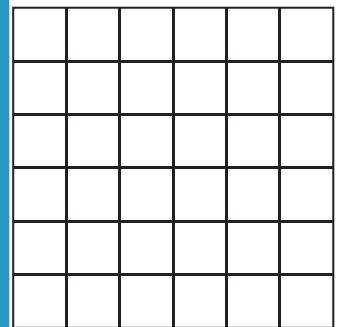
6) Area = 21 square units



7) Area = 10 square units



8) Area = 11 square units



PREVIEW

Gain complete access to the largest collection of worksheets in all subjects!


Members, please log in to download this worksheet.

Not a member? Please sign up to gain complete access.


www.mathworksheets4kids.com

Draw 3 different shapes in each grid with the following area.

10)



11)



12)

