

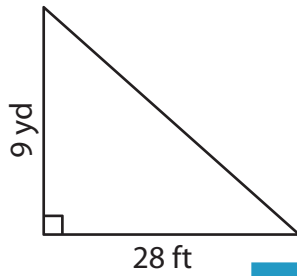
Name : _____

Area – Mixed Shapes

Sheet 1

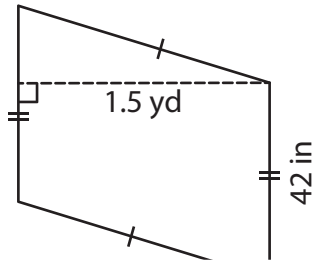
Find the area of each shape.

1)



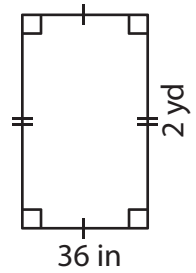
Area = _____ ft²

2)

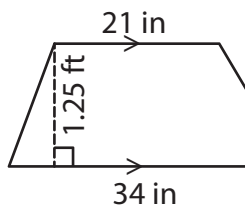


Area = _____ yd²

3)



4)



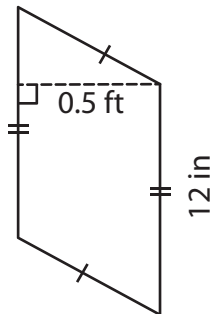
Area = _____ in²

Gain complete access to the largest collection of worksheets in all subjects!

Members, please log in to download this worksheet.

Not a member? Please sign up to gain complete access.

www.mathworksheets4kids.com



Area = _____ ft²

7) The height of a trapezoid is 4.5 yards. The top base is 8.2 yards and 4.6 yards, what is the area of the trapezoid?

Area = _____ yd²

8) Determine the area of the rectangle in square inches, if it is 2.3 feet long and 13 inches wide.

Name : _____

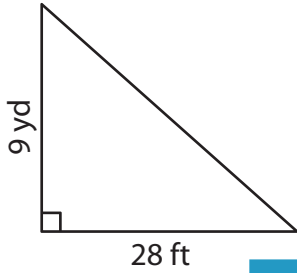
Answer key

Area – Mixed Shapes

Sheet 1

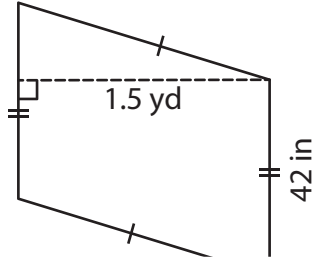
Find the area of each shape.

1)



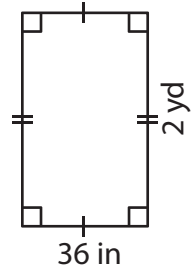
Area = 378 ft²

2)

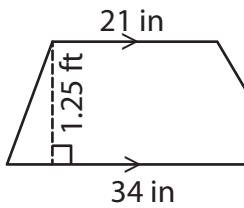


Area = 2 yd²

3)



4)



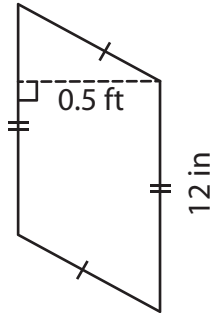
Area = 412.5 in²

Gain complete access to the largest collection of worksheets in all subjects!

Members, please log in to download this worksheet.

Not a member? Please sign up to gain complete access.

www.mathworksheets4kids.com



Area = 0.5 ft²

7) The height of a trapezoid is 8.2 yards and 4.6 yards, what is the area of the trapezoid?

Area = 54.4 square yards

8) Determine the area of the rectangle in square inches, if it is 2.3 feet long and 13 inches wide.

Area = 358.8 square inches