

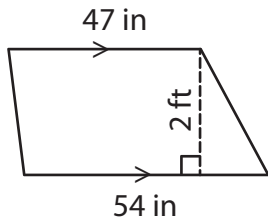
Name : \_\_\_\_\_

## Area – Mixed Shapes

Sheet 2

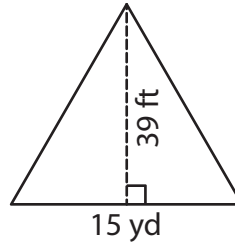
Find the area of each shape.

1)

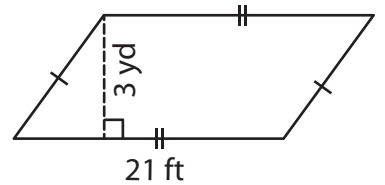


Area = \_\_\_\_\_ in

2)

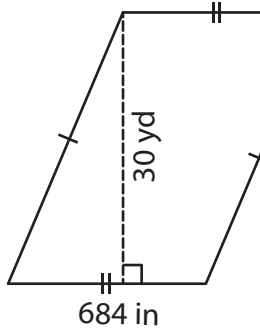


3)



Area = \_\_\_\_\_ ft<sup>2</sup>

4)



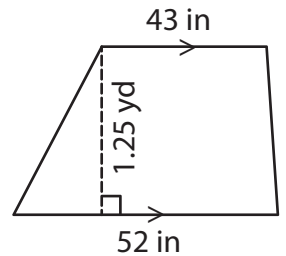
Area = \_\_\_\_\_ yd

Gain complete access to the largest collection of worksheets in all subjects!

Members, please log in to download this worksheet.

Not a member? Please sign up to gain complete access.

[www.mathworksheets4kids.com](http://www.mathworksheets4kids.com)



Area = \_\_\_\_\_ in<sup>2</sup>

7) Find the area of the rectangle. The length and width are 38 feet and 11 yards respectively.

The length and width of the rectangle are 38 feet and 11 yards respectively.

\_\_\_\_\_

8) The height of a triangle is 18 inches. What is the area of the triangle in square yards, if the base is 2 yards?

\_\_\_\_\_

Name : \_\_\_\_\_

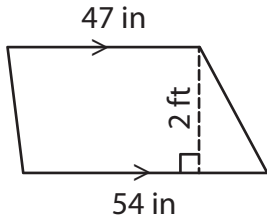
## Answer key

### Area – Mixed Shapes

Sheet 2

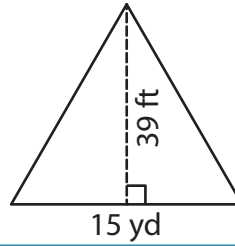
Find the area of each shape.

1)

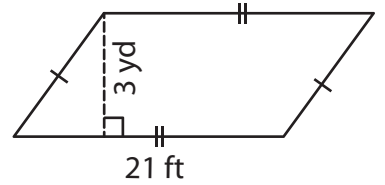


Area = 1,212 in

2)

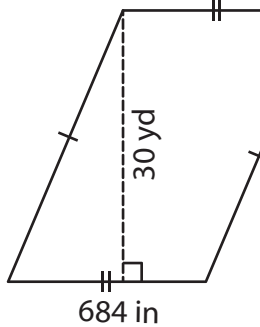


3)



Area = 189 ft<sup>2</sup>

4)



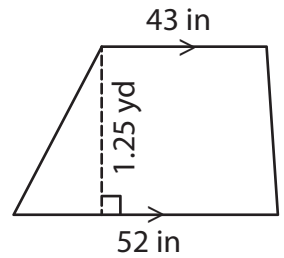
Area = 570 yd

Gain complete access to the largest collection of worksheets in all subjects!

Members, please log in to download this worksheet.

Not a member? Please sign up to gain complete access.

[www.mathworksheets4kids.com](http://www.mathworksheets4kids.com)



Area = 2,137.5 in<sup>2</sup>

7) Find the area of the rectangle. The length and width are 38 feet and 11 yards respectively.

The length and width of the rectangle are 38 feet and 11 yards respectively.

1,254 square feet

8) The height of a triangle is 18 inches. What is the area of the triangle in square yards, if the base is 2 yards?

0.5 square yards