

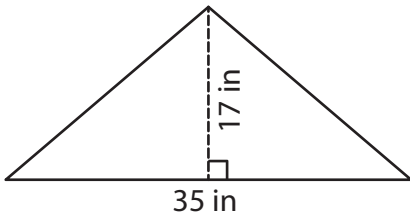
Name : _____

Area – Mixed Shapes

L1S1

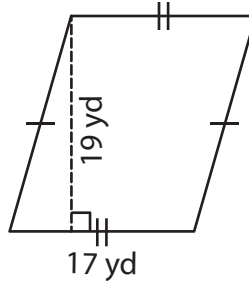
Find the area of each shape.

1)



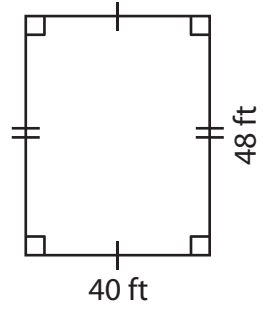
Area = _____

2)



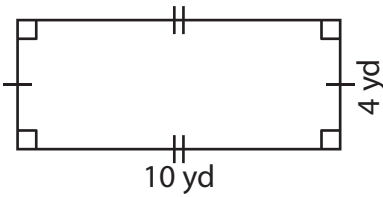
Area = _____

3)



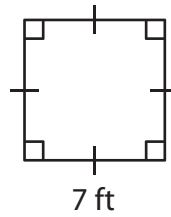
Area = _____

4)



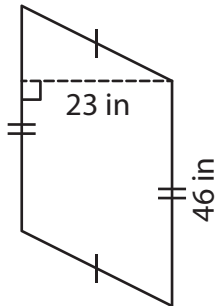
Area = _____

5)



Area = _____

6)



Area = _____

7) The side of a square measures 45 yards. What is the area of the square?

8) Find the area of the triangle whose base is 32 inches and height is 16 inches.

Name : _____

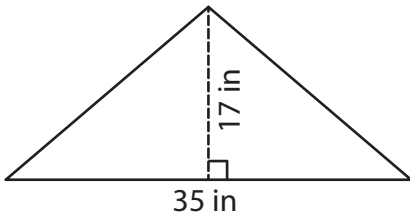
Answer key

Area – Mixed Shapes

L1S1

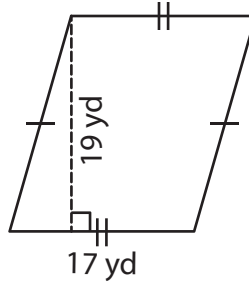
Find the area of each shape.

1)



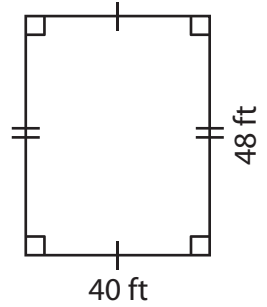
Area = 297.5 in²

2)



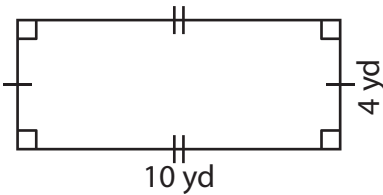
Area = 323 yd²

3)



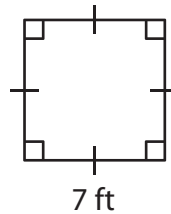
Area = 1,920 ft²

4)



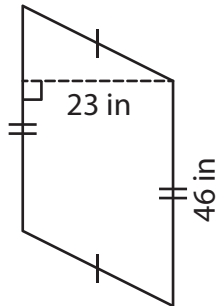
Area = 40 yd²

5)



Area = 49 ft²

6)



Area = 1,058 in²

7) The side of a square measures 45 yards. What is the area of the square?

2,025 square yards

8) Find the area of the triangle whose base is 32 inches and height is 16 inches.

256 square inches