

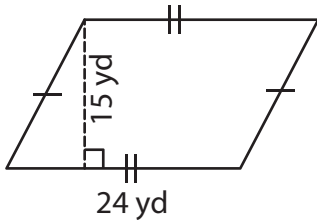
Name : \_\_\_\_\_

## Area – Mixed Shapes

L1S3

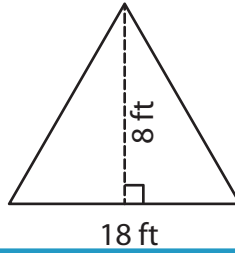
Find the area of each shape.

1)



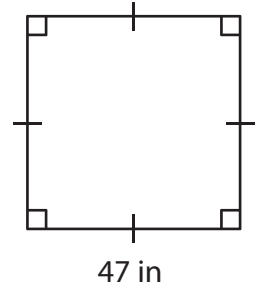
Area = \_\_\_\_\_

2)

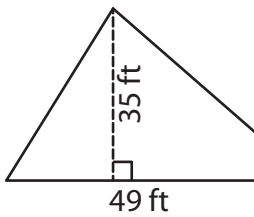


Area = \_\_\_\_\_

3)



4)



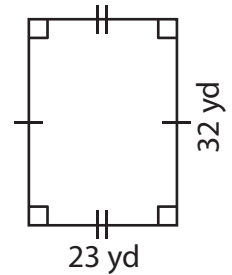
Area = \_\_\_\_\_

**PREVIEW**  
Gain complete access to the largest  
collection of worksheets in all subjects!

Members, please  
log in to  
download this  
worksheet.

Not a member?  
Please sign up to  
gain complete  
access.

[www.mathworksheets4kids.com](http://www.mathworksheets4kids.com)



Area = \_\_\_\_\_

7) If the side of a square

\_\_\_\_\_

8) The length and width of a rectangle are 45 yards and 34 yards respectively. What is the area of the rectangle?

\_\_\_\_\_

Name : \_\_\_\_\_

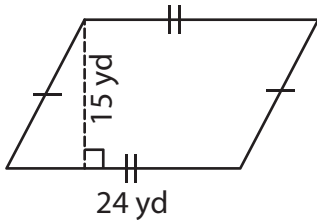
## Answer key

### Area – Mixed Shapes

L1S3

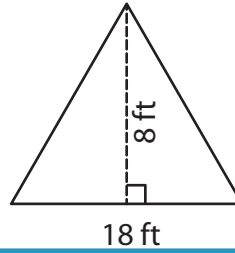
Find the area of each shape.

1)



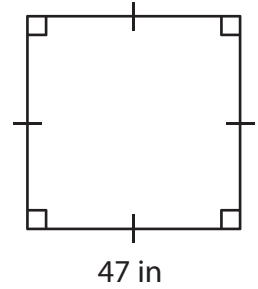
Area = 360 yd<sup>2</sup>

2)

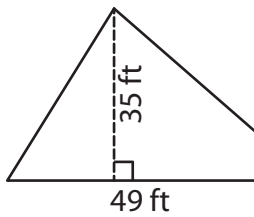


Area = 2,209 in<sup>2</sup>

3)



4)



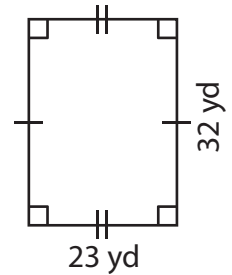
Area = 857.5 ft<sup>2</sup>

Gain complete access to the largest collection of worksheets in all subjects!

Members, please log in to download this worksheet.

Not a member? Please sign up to gain complete access.

[www.mathworksheets4kids.com](http://www.mathworksheets4kids.com)



Area = 736 yd<sup>2</sup>

7) If the side of a square

625 square feet

8) The length and width of a rectangle are 45 yards and 34 yards respectively. What is the area of the rectangle?

1,530 square yards