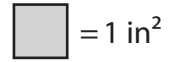


Name : _____


Counting Squares

L1S1




Find the area of each shape by counting the squares.

1)




Area = _____

2)




Area = _____

3)




Area = _____

4)




Area = _____

5)



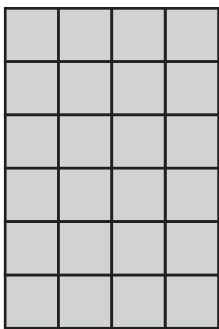
Area = _____

6)




Area = _____

7)




Area = _____

8)



Area = _____

9)




Area = _____

10)




Area = _____

11)



Area = _____

12)



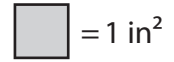
Area = _____

Name : _____

Answer key


Counting Squares

L1S1




Find the area of each shape by counting the squares.

1)



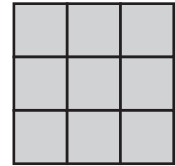
Area = 12 in²

2)




Area = 30 in²

3)




Area = 9 in²

4)




Area = 25 in²

5)



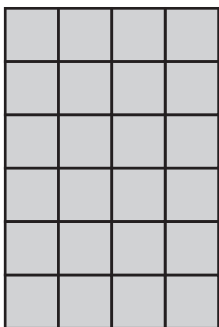
Area = 20 in²

6)




Area = 16 in²

7)




Area = 24 in²

8)




Area = 15 in²

9)




Area = 24 in²

10)




Area = 12 in²

11)



Area = 36 in²

12)



Area = 20 in²