

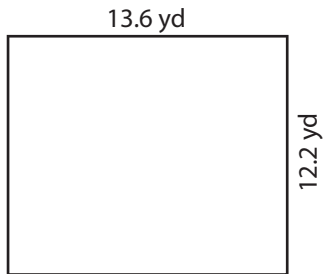
Name : _____

Area of a Rectangle

T1S1


Find the area of each rectangle.

1)



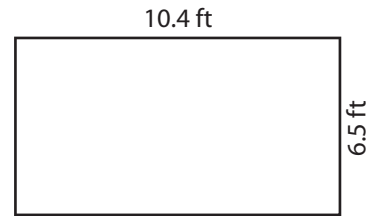
Area =

2)



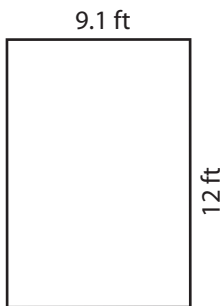
Area =

3)



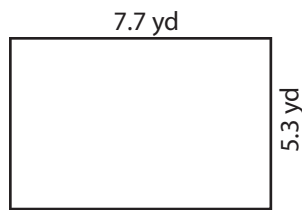
Area =

4)



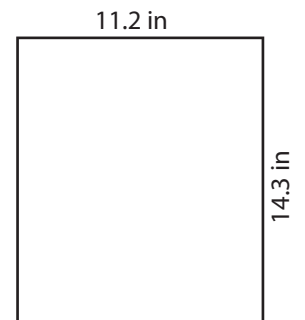
Area =

5)




Area =

6)



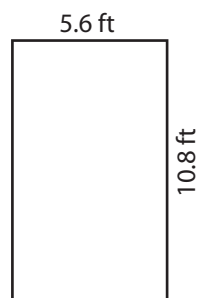
Area =

7)



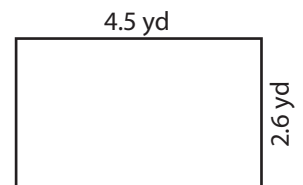
Area =

8)



Area =

9)



Area =

Name : _____

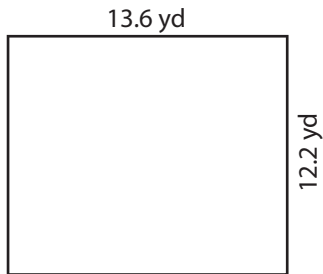
Answer key

Area of a Rectangle

T1S1


Find the area of each rectangle.

1)



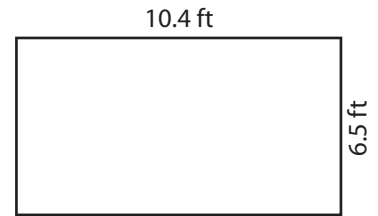
Area = **165.92 yd²**

2)



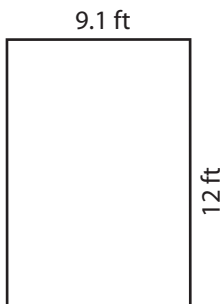
Area = **126.42 in²**

3)



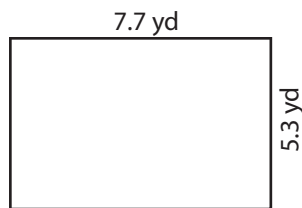
Area = **67.6 ft²**

4)



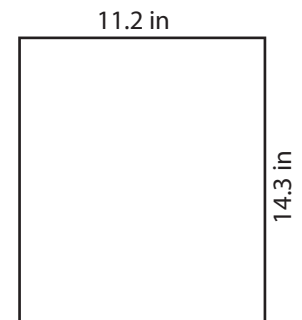
Area = **109.2 ft²**

5)




Area = **40.81 yd²**

6)




Area = **160.16 in²**

7)



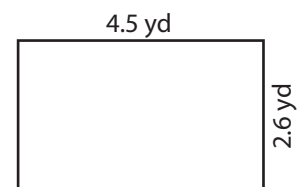
Area = **211.72 in²**

8)



Area = **60.48 ft²**

9)



Area = **11.7 yd²**