


Name : \_\_\_\_\_

T1S2

## Area of a Rectangle

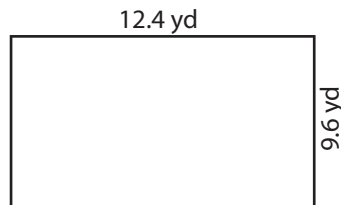
Find the area of each rectangle.

1)



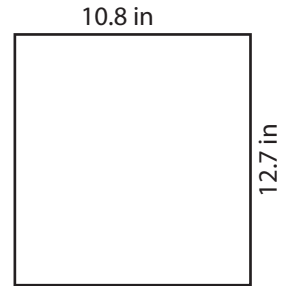
Area =

2)

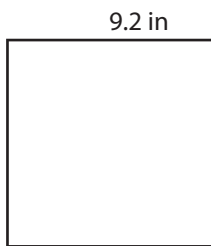


Area =

3)



4)



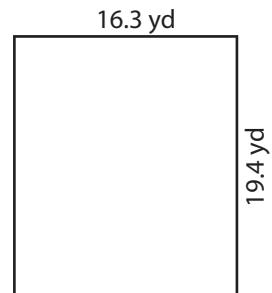
Area =

Gain complete access to the largest collection of worksheets in all subjects!

Members, please log in to download this worksheet.

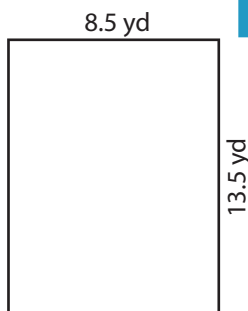
Not a member? Please sign up to gain complete access.

[www.mathworksheets4kids.com](http://www.mathworksheets4kids.com)




Area =

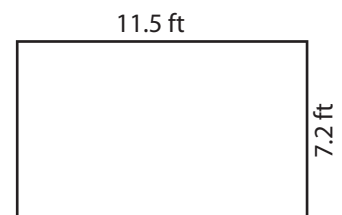
7)



Area =



Area =



Area =

Name : \_\_\_\_\_

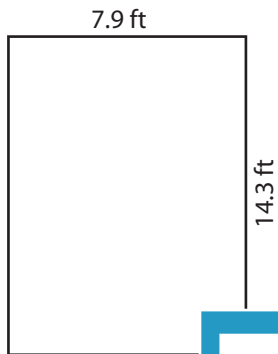
## Answer key

### Area of a Rectangle

T1S2

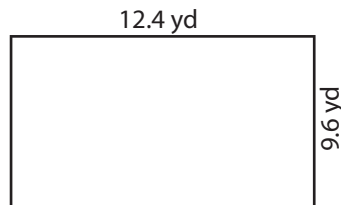
Find the area of each rectangle.

1)



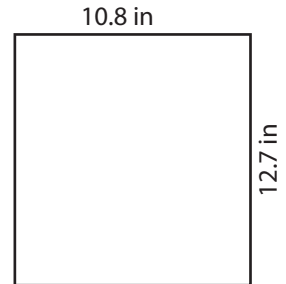
Area = **112.97 ft<sup>2</sup>**

2)

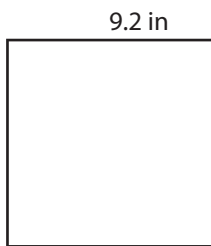


Area = **137.16 in<sup>2</sup>**

3)



4)



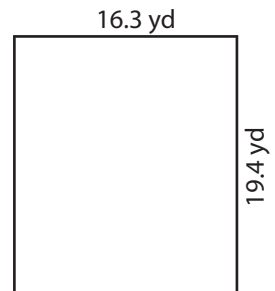
Area = **74.52 in<sup>2</sup>**

Gain complete access to the largest collection of worksheets in all subjects!

Members, please log in to download this worksheet.

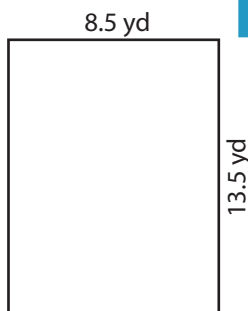
Not a member? Please sign up to gain complete access.

[www.mathworksheets4kids.com](http://www.mathworksheets4kids.com)




Area = **316.22 yd<sup>2</sup>**

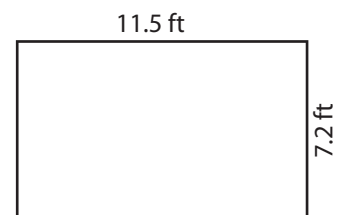
7)



Area = **114.75 yd<sup>2</sup>**



Area = **52.52 in<sup>2</sup>**



Area = **82.8 ft<sup>2</sup>**