


Name : _____

T1S3

Area of a Rectangle

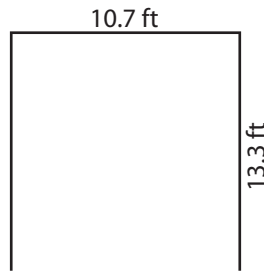
Find the area of each rectangle.

1)



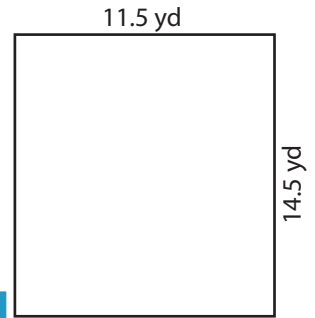
Area =

2)

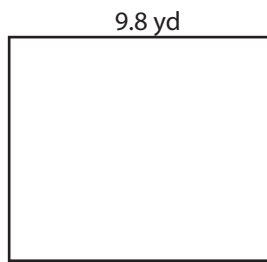


Area =

3)



4)



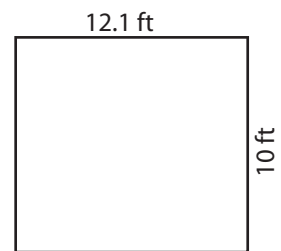
Area =

Gain complete access to the largest collection of worksheets in all subjects!

Members, please log in to download this worksheet.


Not a member? Please sign up to gain complete access.

www.mathworksheets4kids.com

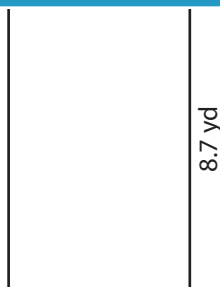


Area =

7)



Area =



Area =



Area =

Name : _____


Answer key

T1S3

Area of a Rectangle

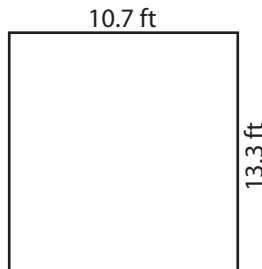
Find the area of each rectangle.

1)



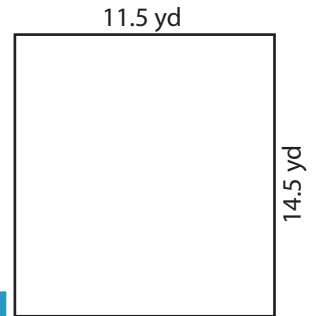
Area = **82.88 in²**

2)

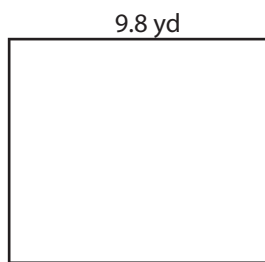


Area = **166.75 yd²**

3)



4)



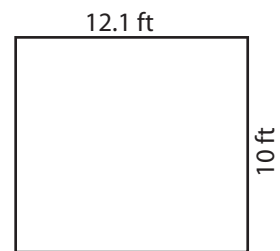
Area = **83.3 yd²**

Gain complete access to the largest collection of worksheets in all subjects!

Members, please log in to download this worksheet.


Not a member? Please sign up to gain complete access.

www.mathworksheets4kids.com

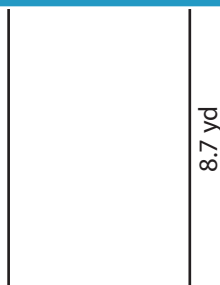


Area = **121 ft²**

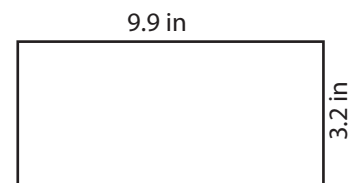
7)



Area = **94.5 ft²**



Area = **36.54 yd²**



Area = **31.68 in²**