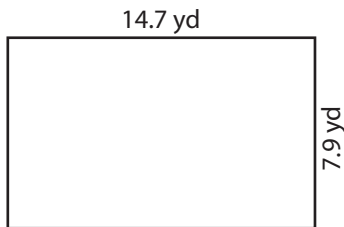


Name : _____

Area of a Rectangle

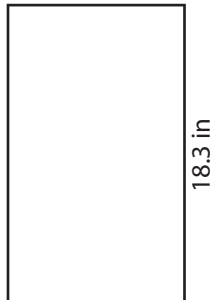
Find the area of each rectangle.

1)



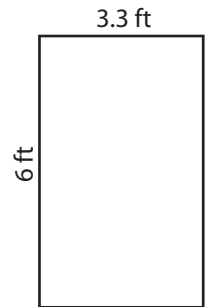
Area =

2)

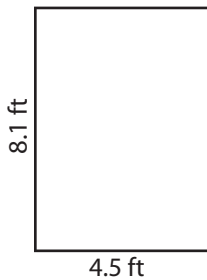


Area =

3)



4)



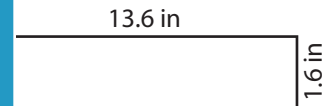
Area =

PREVIEW
Gain complete access to the largest collection of worksheets in all subjects!

Members, please log in to download this worksheet.


Not a member? Please sign up to gain complete access.

www.mathworksheets4kids.com

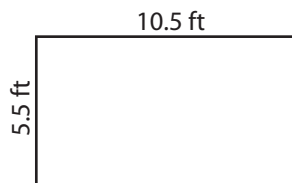


Area =

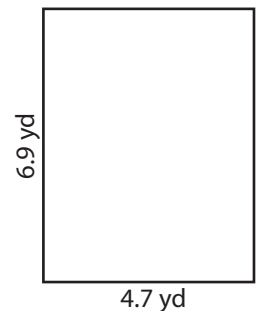
7)



Area =



Area =



Area =

Name : _____

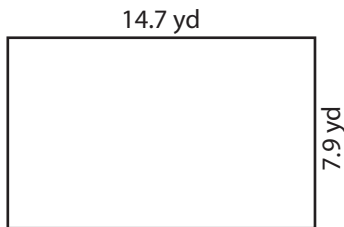
Answer key

Area of a Rectangle

T1S4

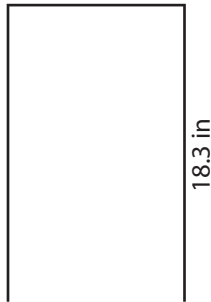
Find the area of each rectangle.

1)



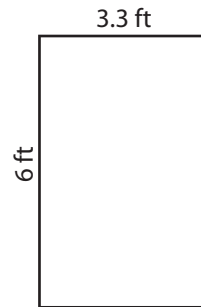
Area = **116.13 yd²**

2)



Area = **19.8 ft²**

3)



4)



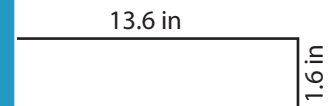
Area = **36.45 ft²**

Gain complete access to the largest collection of worksheets in all subjects!

Members, please log in to download this worksheet.

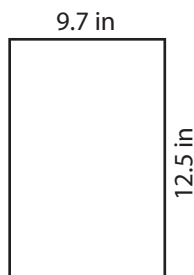
Not a member? Please sign up to gain complete access.

www.mathworksheets4kids.com

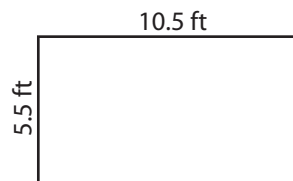


Area = **21.76 in²**

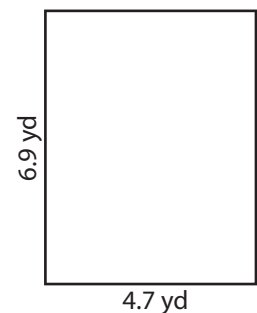
7)



Area = **121.25 in²**



Area = **57.75 ft²**



Area = **32.43 yd²**