

Name : _____

Area of a Rectangle

T1S5

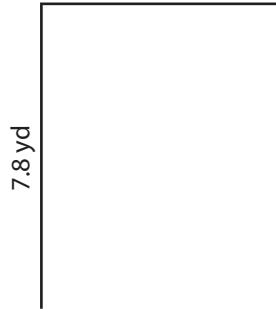
Find the area of each rectangle.

1)




Area =

2)




Area =

3)



4)



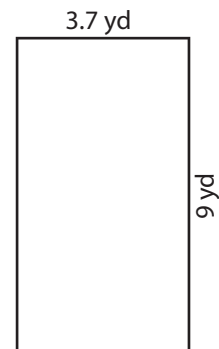
Area =

Gain complete access to the largest collection of worksheets in all subjects!

Members, please log in to download this worksheet.

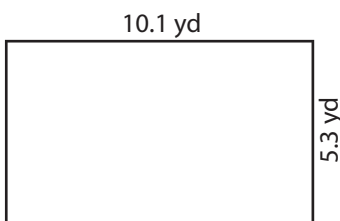
Not a member? Please sign up to gain complete access.

www.mathworksheets4kids.com

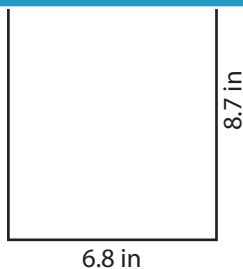


Area =

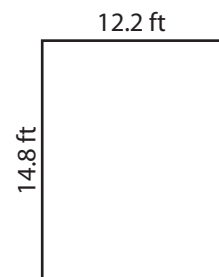
7)



Area =



Area =



Area =

Name : _____

Answer key

T1S5

Area of a Rectangle

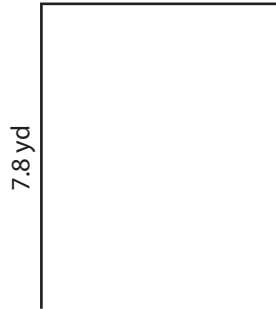
Find the area of each rectangle.

1)




Area = **24.61 ft²**

2)




Area = **9 in²**

3)



4)



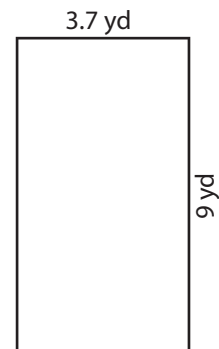
Area = **88.16 in²**

Gain complete access to the largest collection of worksheets in all subjects!

Members, please log in to download this worksheet.

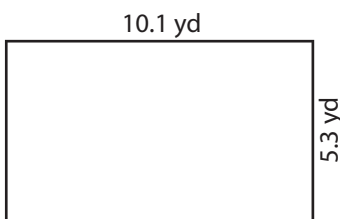
Not a member? Please sign up to gain complete access.

www.mathworksheets4kids.com

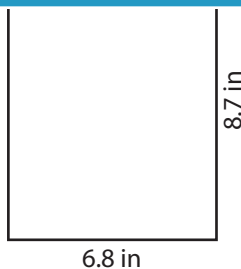


Area = **33.3 yd²**

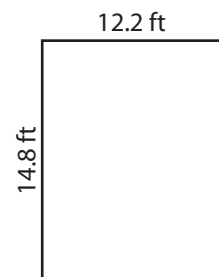
7)



Area = **53.53 yd²**



Area = **59.16 in²**



Area = **180.56 ft²**