

Name : \_\_\_\_\_

## Area of a Rectangle

T2S2

A) Find the area of each rectangle for the given measurements.

1) length = 8.6 yd, width = 3.8 yd

Area = \_\_\_\_\_

2) width = 4.7 ft, length = 14.2 ft

Area = \_\_\_\_\_

3) width = 15.3 in, length = 18.1 in

4) length = 6.9 yd, width = 3.5 yd

Area = \_\_\_\_\_

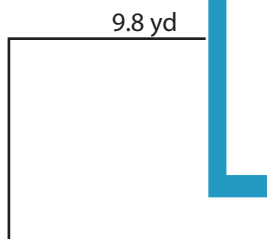
B) Find the area of each

5)



Area = \_\_\_\_\_

7)



Area = \_\_\_\_\_

**PREVIEW**

Gain complete access to the largest collection of worksheets in all subjects!

Members, please log in to download this worksheet.

Not a member? Please sign up to gain complete access.

[www.mathworksheets4kids.com](http://www.mathworksheets4kids.com)

4.9 in

13.1 ft

Area = \_\_\_\_\_

9) The length and width of a rectangle are 12.5 inches and 4.3 inches respectively. Determine the area of the rectangle.

\_\_\_\_\_

Name : \_\_\_\_\_

## Answer key

T2S2

### Area of a Rectangle

A) Find the area of each rectangle for the given measurements.

1) length = 8.6 yd, width = 3.8 yd

Area = 32.68 yd<sup>2</sup>

2) width = 4.7 ft, length = 14.2 ft

Area = 66.74 ft<sup>2</sup>

3) width = 15.3 in, length = 18.1 in

Area = 276.93 in<sup>2</sup>

4) length = 6.9 yd, width = 3.5 yd

Area = 24.15 yd<sup>2</sup>

B) Find the area of each

5)



Area = 12 ft<sup>2</sup>

**PREVIEW**  
Gain complete access to the largest collection of worksheets in all subjects!

Members, please log in to download this worksheet.

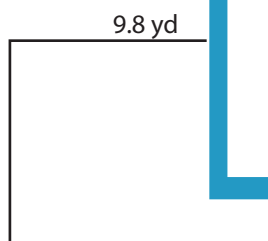
Not a member? Please sign up to gain complete access.

[www.mathworksheets4kids.com](http://www.mathworksheets4kids.com)

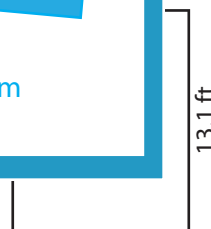


Area = 24.01 in<sup>2</sup>

7)



Area = 74.48 yd<sup>2</sup>



Area = 136.24 ft<sup>2</sup>

9) The length and width of a rectangle are 12.5 inches and 4.3 inches respectively. Determine the area of the rectangle.

53.75 square inches