

Name : _____

Area of a Rectangle

A) Find the area of each rectangle for the given measurements.

1) width = 5.2 in, length = 7.5 in

2) length = 15.4 yd, width = 9.6 yd

Area = _____

Area = _____

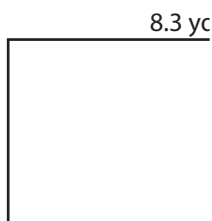
3) length = 10.7 ft, width = 2.9 ft

4) width = 12.1 in, length = 19.3 in

Area = _____

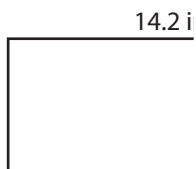
B) Find the area of each

5)



Area = _____

7)



Area = _____

PREVIEW

Gain complete access to the largest collection of worksheets in all subjects!

Members, please log in to download this worksheet.

Not a member? Please sign up to gain complete access.

www.mathworksheets4kids.com

8.3 yd

3.5 ft

14.2 in

13.3 yd

Area = _____

9) PQRS is a rectangle with PQ = 17.2 feet and QR = 11.1 feet. Find the area.

Name : _____

Answer key

T2S3

Area of a Rectangle

A) Find the area of each rectangle for the given measurements.

1) width = 5.2 in, length = 7.5 in

Area = 39 in²

2) length = 15.4 yd, width = 9.6 yd

Area = 147.84 yd²

3) length = 10.7 ft, width = 2.9 ft

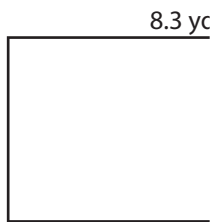
Area = 31.03

4) width = 12.1 in, length = 19.3 in

in²

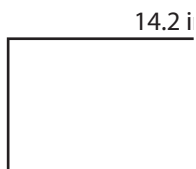
B) Find the area of each

5)



Area = 36.52

7)



Area = 85.2 in²

Area = 214.13 yd²

9) PQRS is a rectangle with PQ = 17.2 feet and QR = 11.1 feet. Find the area.

190.92 square feet