

Name : \_\_\_\_\_

## Area of a Rectangle

A) Find the area of each rectangle for the given measurements.

1) length = 6.3 ft, width = 4.8 ft

Area = \_\_\_\_\_

2) width = 17.1 in, length = 19.4 in

Area = \_\_\_\_\_


3) width = 8.8 yd, length = 12.5 yd

4) length = 5.2 ft, width = 1.3 ft

Area = \_\_\_\_\_

B) Find the area of each

5)



Area = \_\_\_\_\_

**PREVIEW**  
Gain complete access to the largest collection of worksheets in all subjects!

Members, please log in to download this worksheet.

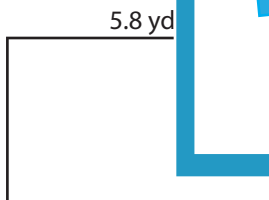
Not a member? Please sign up to gain complete access.

[www.mathworksheets4kids.com](http://www.mathworksheets4kids.com)




10.9 yd

7)



Area = \_\_\_\_\_



2.4 ft

Area = \_\_\_\_\_

9) What is the area of the rectangle ABCD, if AB = 7 inches and BC = 13.2 inches?

\_\_\_\_\_

Name : \_\_\_\_\_

## Answer key

T2S4

# Area of a Rectangle

A) Find the area of each rectangle for the given measurements.

1) length = 6.3 ft, width = 4.8 ft

Area = 30.24 ft<sup>2</sup>

2) width = 17.1 in, length = 19.4 in

Area = 331.74 in<sup>2</sup>


3) width = 8.8 yd, length = 12.5 yd

Area = 110 yd<sup>2</sup>

4) length = 5.2 ft, width = 1.3 ft

B) Find the area of each

5)



Area = 149.37 in<sup>2</sup>

Gain complete access to the largest collection of worksheets in all subjects!

Members, please log in to download this worksheet.

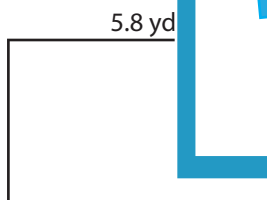
Not a member? Please sign up to gain complete access.

[www.mathworksheets4kids.com](http://www.mathworksheets4kids.com)




Area = 149.37 yd<sup>2</sup>

7)



Area = 20.88 yd<sup>2</sup>



Area = 34.8 ft<sup>2</sup>

9) What is the area of the rectangle ABCD, if AB = 7 inches and BC = 13.2 inches?

92.4 square inches