

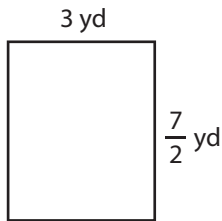
Name : _____

Area of a Rectangle

T1S3

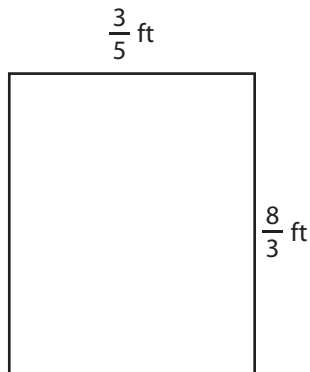
Find the area of each rectangle.

1)




Area =

2)

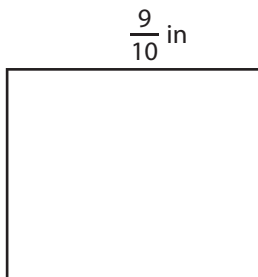


Area =

3)



4)



Area =

PREVIEW
Gain complete access to the largest collection of worksheets in all subjects!

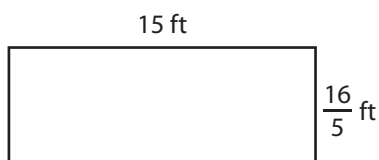
Members, please log in to download this worksheet.

Not a member? Please sign up to gain complete access.

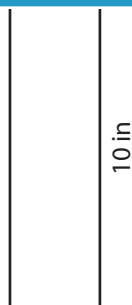
www.mathworksheets4kids.com

Area =

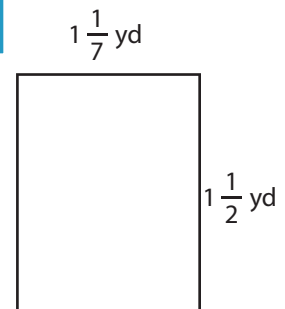
7)



Area =



Area =



Area =

Name : _____

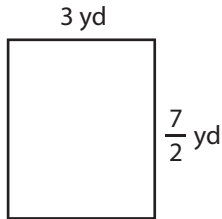
Answer key

Area of a Rectangle

T1S3

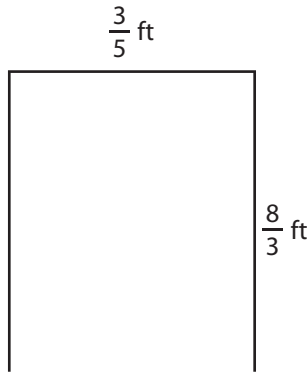
Find the area of each rectangle.

1)




Area = $\frac{21}{2}$ or 10

2)

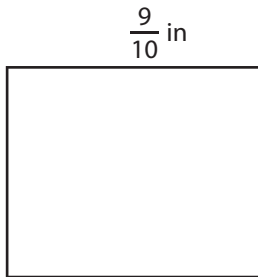


3)



Area = 32 in^2

4)



Area = $\frac{2}{5} \text{ in}^2$

Gain complete access to the largest collection of worksheets in all subjects!

Members, please log in to download this worksheet.

Not a member? Please sign up to gain complete access.

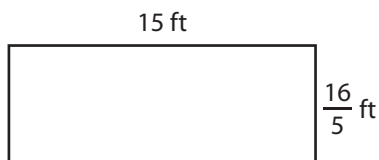
www.mathworksheets4kids.com

$\frac{13}{18}$ ft

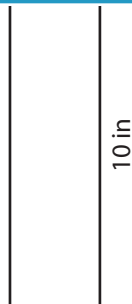


Area = $\frac{10}{9}$ or $1\frac{1}{9} \text{ ft}^2$

7)

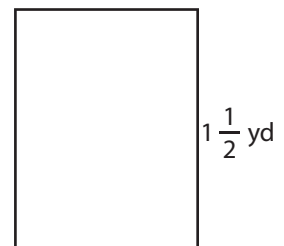


Area = 48 ft^2



Area = 5 in^2

$1\frac{1}{7}$ yd



Area = $\frac{12}{7}$ or $1\frac{5}{7} \text{ yd}^2$