

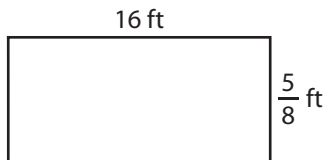
Name : _____

Area of a Rectangle

T1S4

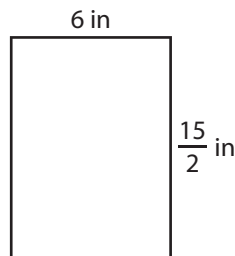
Find the area of each rectangle.

1)



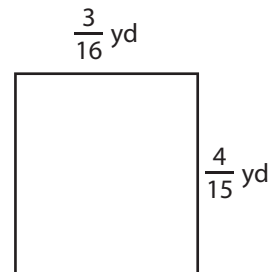
Area =

2)




Area =

3)



4)



Area =

PREVIEW
Gain complete access to the largest collection of worksheets in all subjects!

Members, please log in to download this worksheet.

Not a member? Please sign up to gain complete access.

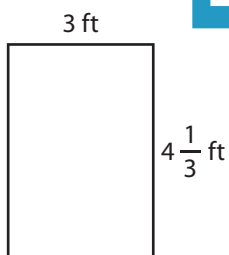
www.mathworksheets4kids.com

$\frac{14}{5}$ in

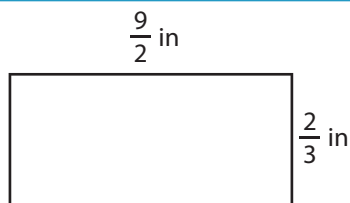
Area =



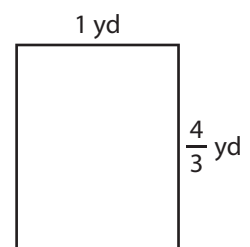
7)



Area =



Area =



Area =

Name : _____

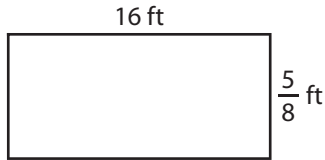
Answer key

T1S4

Area of a Rectangle

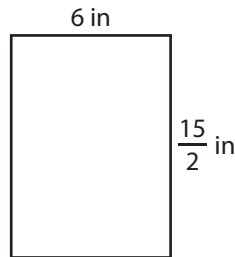
Find the area of each rectangle.

1)



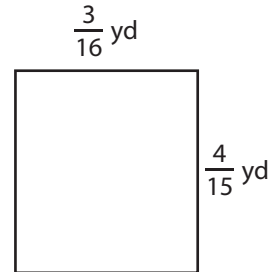
Area = 10 ft^2

2)




Area = $\frac{1}{20} \text{ yd}^2$

3)



4)



Area = 25 yd^2

Gain complete access to the largest collection of worksheets in all subjects!

Members, please log in to download this worksheet.

Not a member? Please sign up to gain complete access.

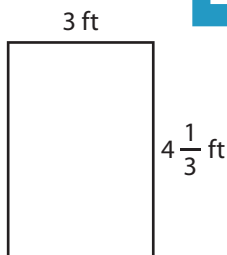
www.mathworksheets4kids.com

$\frac{14}{5}$ in



Area = 4 in^2

7)



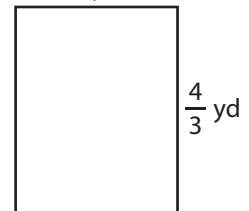
Area = 13 ft^2

$\frac{9}{2}$ in



Area = 3 in^2

1 yd



Area = $\frac{4}{3}$ or $1\frac{1}{3} \text{ yd}^2$