

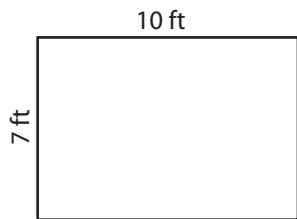
Name : \_\_\_\_\_

## Area of a Rectangle

T1L1S2

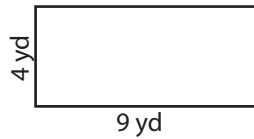
Find the area of each rectangle.

1)



Area =

2)

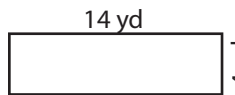


Area =

3)



4)



Area =

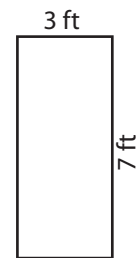
**PREVIEW**

Gain complete access to the largest collection of worksheets in all subjects!

Members, please log in to download this worksheet.

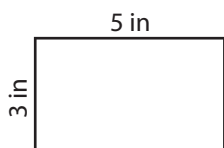
Not a member? Please sign up to gain complete access.

[www.mathworksheets4kids.com](http://www.mathworksheets4kids.com)

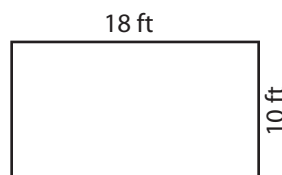


Area =

7)



Area =



Area =



Area =

Name : \_\_\_\_\_

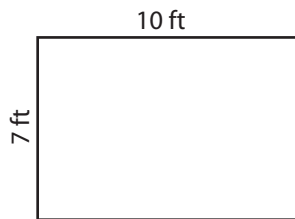
## Answer key

### Area of a Rectangle

T1L1S2

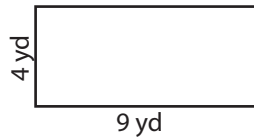
Find the area of each rectangle.

1)



Area = **70 ft<sup>2</sup>**

2)

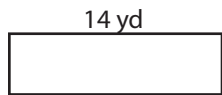


Area = **90 in<sup>2</sup>**

3)



4)



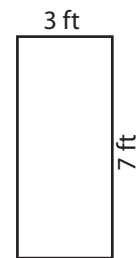
Area = **56 yd<sup>2</sup>**

Gain complete access to the largest collection of worksheets in all subjects!

Members, please log in to download this worksheet.

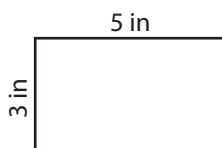
Not a member? Please sign up to gain complete access.

[www.mathworksheets4kids.com](http://www.mathworksheets4kids.com)

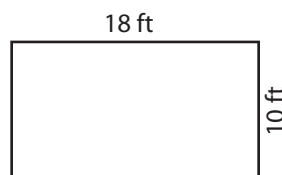


Area = **21 ft<sup>2</sup>**

7)



Area = **15 in<sup>2</sup>**



Area = **180 ft<sup>2</sup>**



Area = **12 yd<sup>2</sup>**