

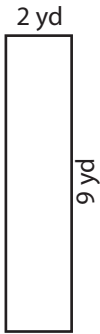
Name : _____

Area of a Rectangle

T1L1S3

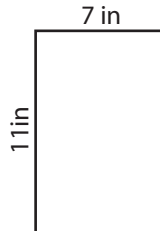
Find the area of each rectangle.

1)



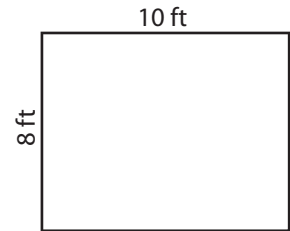
Area =

2)

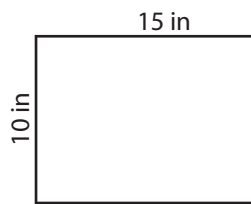


Area =

3)



4)



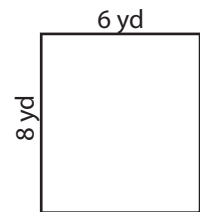
Area =

Gain complete access to the largest collection of worksheets in all subjects!

Members, please log in to download this worksheet.

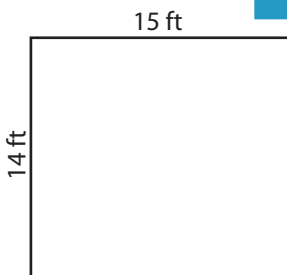
Not a member? Please sign up to gain complete access.

www.mathworksheets4kids.com

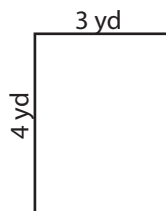


Area =

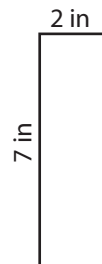
7)



Area =



Area =



Area =

Name : _____

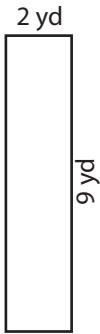
Answer key

Area of a Rectangle

T1L1S3

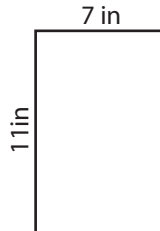
Find the area of each rectangle.

1)



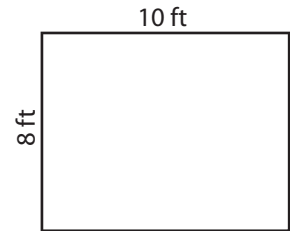
Area = **18 yd²**

2)

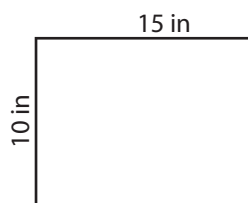


Area = **80 ft²**

3)



4)



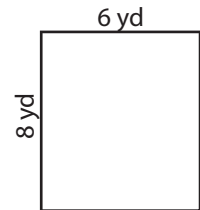
Area = **150 in²**

Gain complete access to the largest collection of worksheets in all subjects!

Members, please log in to download this worksheet.

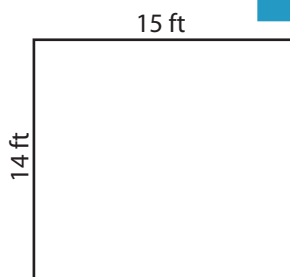
Not a member? Please sign up to gain complete access.

www.mathworksheets4kids.com

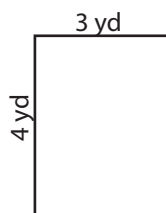


Area = **48 yd²**

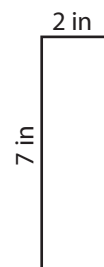
7)



Area = **210 ft²**



Area = **12 yd²**



Area = **14 in²**