


Name : _____

Area of a Rectangle

T1L1S4


Find the area of each rectangle.

1)



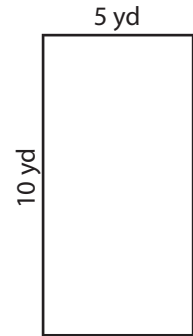
Area =

2)

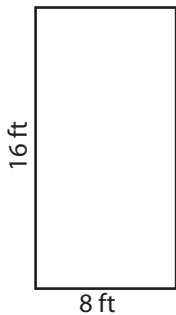


Area =

3)



4)




Area =

PREVIEW
Gain complete access to the largest collection of worksheets in all subjects!

Members, please log in to download this worksheet.

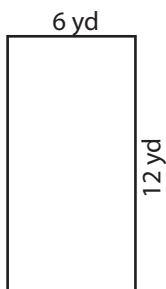
Not a member? Please sign up to gain complete access.

www.mathworksheets4kids.com




Area =

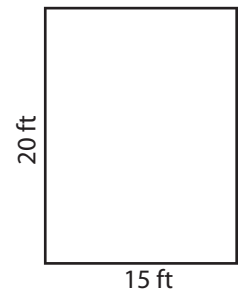
7)



Area =



Area =



Area =

Name : _____

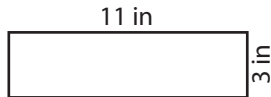
Answer key

Area of a Rectangle

T1L1S4

Find the area of each rectangle.

1)

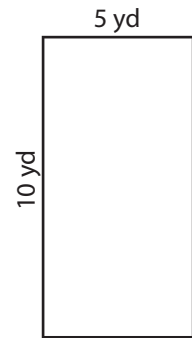


Area = **33 in²**

2)

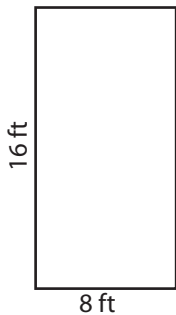


3)



Area = **50 yd²**

4)



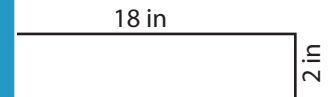
Area = **128 ft²**

PREVIEW
Gain complete access to the largest collection of worksheets in all subjects!

Members, please log in to download this worksheet.

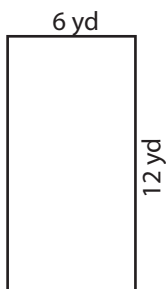
Not a member? Please sign up to gain complete access.

www.mathworksheets4kids.com




Area = **36 in²**

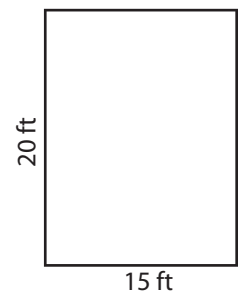
7)



Area = **72 yd²**



Area = **153 in²**



Area = **300 ft²**