

Name : \_\_\_\_\_

## Area of a Rectangle

T1L1S5

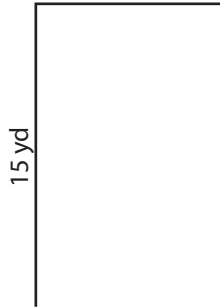
Find the area of each rectangle.

1)

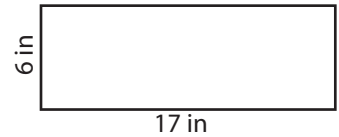


Area =

2)

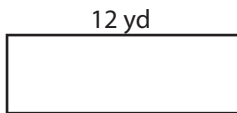


3)



Area =

4)




Area =

Gain complete access to the largest collection of worksheets in all subjects!

Members, please log in to download this worksheet.


Not a member? Please sign up to gain complete access.

[www.mathworksheets4kids.com](http://www.mathworksheets4kids.com)

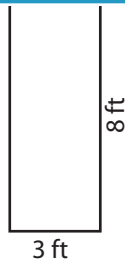


Area =

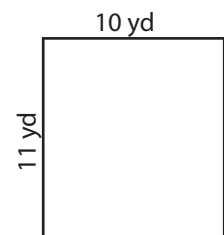
7)



Area =



Area =



Area =

Name : \_\_\_\_\_

## Answer key

### Area of a Rectangle

T1L1S5

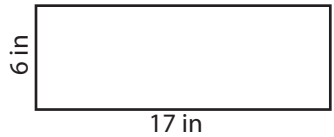
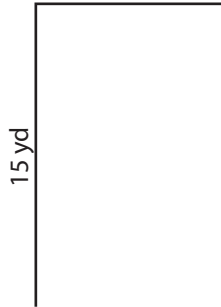
Find the area of each rectangle.

1)



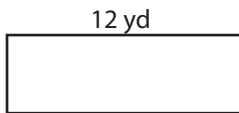
Area = **16 ft<sup>2</sup>**

2)



Area = **102 in<sup>2</sup>**

4)



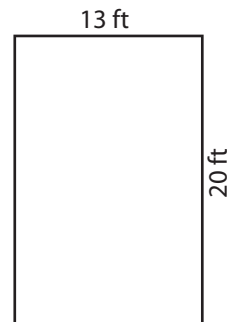
Area = **48 yd<sup>2</sup>**

Gain complete access to the largest collection of worksheets in all subjects!

Members, please log in to download this worksheet.

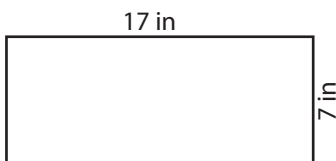
Not a member? Please sign up to gain complete access.

[www.mathworksheets4kids.com](http://www.mathworksheets4kids.com)

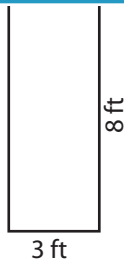


Area = **260 ft<sup>2</sup>**

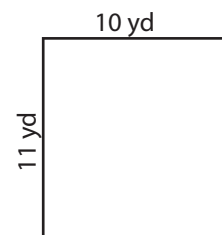
7)



Area = **119 in<sup>2</sup>**



Area = **24 ft<sup>2</sup>**



Area = **110 yd<sup>2</sup>**