

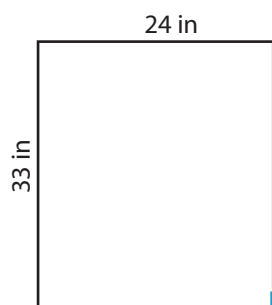
Name : _____

Area of a Rectangle

T1L2S1

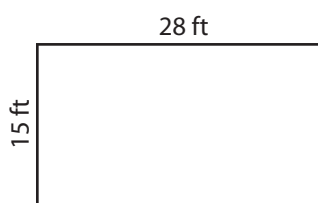
Find the area of each rectangle.

1)



Area =

2)

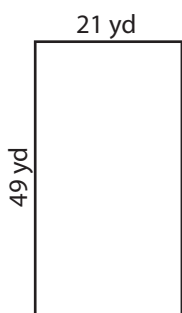


Area =

3)



4)



Area =

PREVIEW
Gain complete access to the largest collection of worksheets in all subjects!

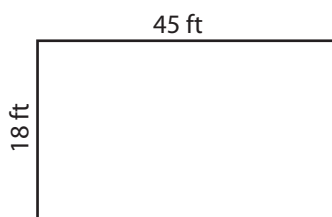
Members, please log in to download this worksheet.

Not a member? Please sign up to gain complete access.

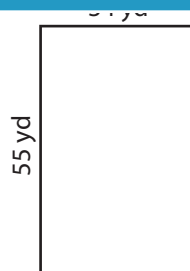
www.mathworksheets4kids.com

Area =

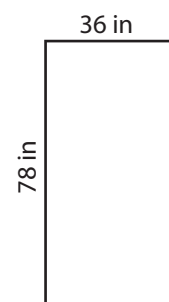
7)



Area =



Area =



Area =

Name : _____

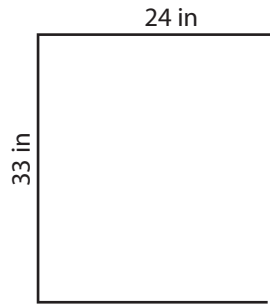
Answer key

Area of a Rectangle

T1L2S1

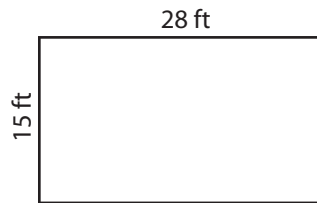
Find the area of each rectangle.

1)



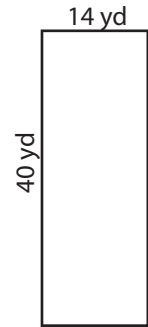
Area = **792 in²**

2)



Area = **560 yd²**

3)



4)



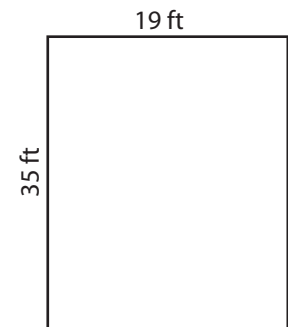
Area = **1,029 yd²**

Gain complete access to the largest collection of worksheets in all subjects!

Members, please log in to download this worksheet.

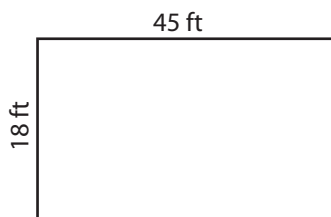
Not a member? Please sign up to gain complete access.

www.mathworksheets4kids.com



Area = **665 ft²**

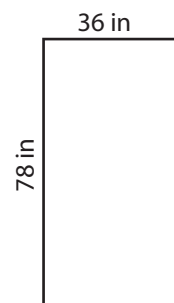
7)



Area = **810 ft²**



Area = **1,870 yd²**



Area = **2,808 in²**