

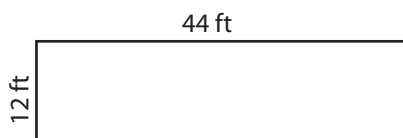
Name : _____

Area of a Rectangle

T1L2S2

Find the area of each rectangle.

1)



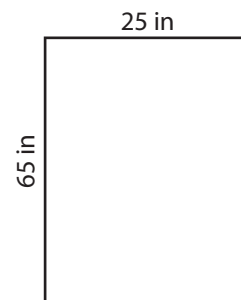
Area =

2)

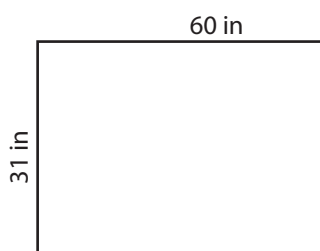


Area =

3)



4)



Area =

Gain complete access to the largest collection of worksheets in all subjects!

Members, please log in to download this worksheet.


Not a member? Please sign up to gain complete access.

www.mathworksheets4kids.com

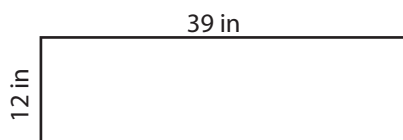


Area =

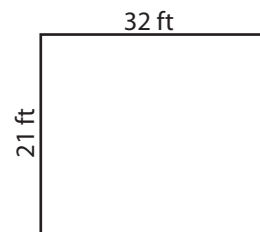
7)



Area =



Area =



Area =

Name : _____

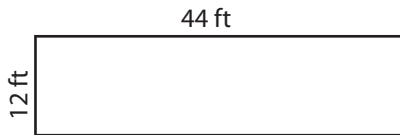
Answer key

Area of a Rectangle

T1L2S2

Find the area of each rectangle.

1)



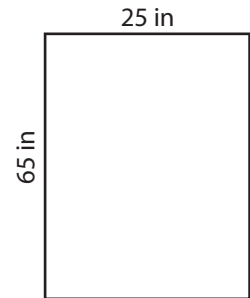
Area = **528 ft²**

2)



Area = **1,625 in²**

3)



4)



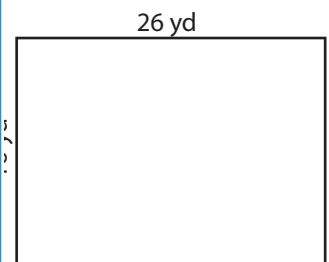
Area = **1,860 in²**

Gain complete access to the largest collection of worksheets in all subjects!

Members, please log in to download this worksheet.


Not a member? Please sign up to gain complete access.

www.mathworksheets4kids.com

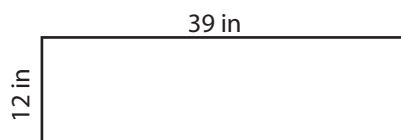


Area = **416 yd²**

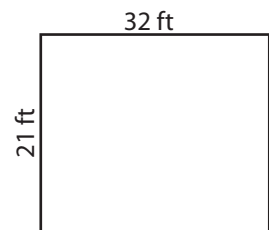
7)



Area = **650 yd²**



Area = **468 in²**



Area = **672 ft²**