

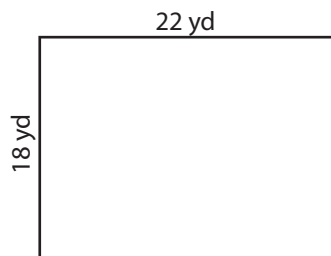
Name : \_\_\_\_\_

## Area of a Rectangle

T1L2S3

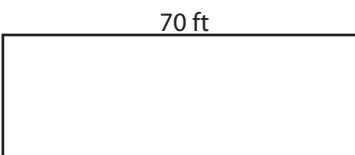
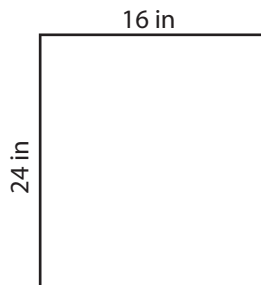
Find the area of each rectangle.

1)



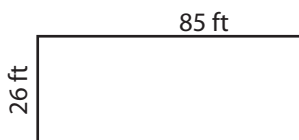
Area =

2)



Area =

4)



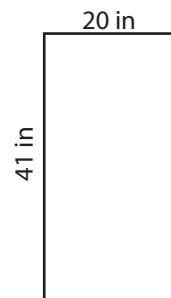
Area =

**PREVIEW**  
Gain complete access to the largest collection of worksheets in all subjects!

Members, please log in to download this worksheet.


Not a member? Please sign up to gain complete access.

[www.mathworksheets4kids.com](http://www.mathworksheets4kids.com)




Area =

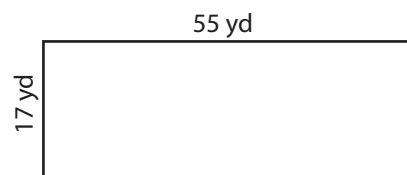
7)



Area =



Area =



Area =

Name : \_\_\_\_\_

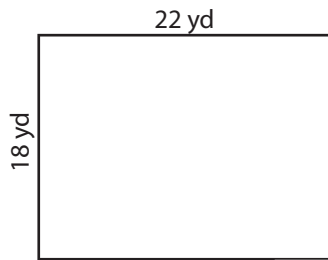
## Answer key

T1L2S3

# Area of a Rectangle

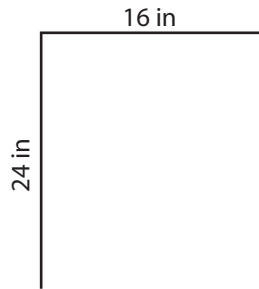
Find the area of each rectangle.

1)

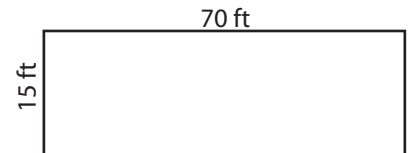


Area = **396 yd<sup>2</sup>**

2)




3)



Area = **1,050 ft<sup>2</sup>**

4)



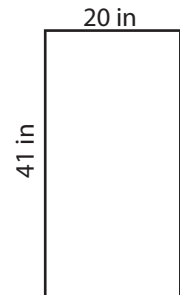
Area = **2,210 ft<sup>2</sup>**

Gain complete access to the largest collection of worksheets in all subjects!

Members, please log in to download this worksheet.


Not a member? Please sign up to gain complete access.

[www.mathworksheets4kids.com](http://www.mathworksheets4kids.com)

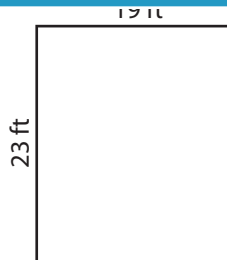


Area = **820 in<sup>2</sup>**

7)



Area = **2,178 in<sup>2</sup>**



Area = **437 ft<sup>2</sup>**



Area = **935 yd<sup>2</sup>**