


Name : _____

Area of a Rectangle

T1L2S4

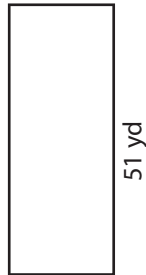
Find the area of each rectangle.

1)



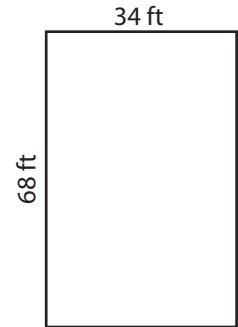
Area =

2)



Area =

3)



4)



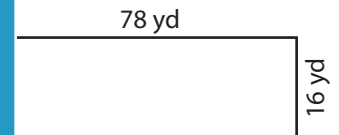
Area =

Gain complete access to the largest collection of worksheets in all subjects!

Members, please log in to download this worksheet.

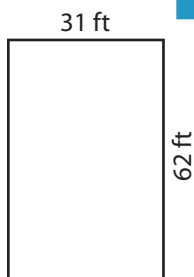
Not a member? Please sign up to gain complete access.

www.mathworksheets4kids.com



Area =

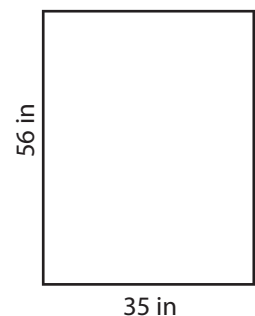
7)



Area =



Area =



Area =

Name : _____


Answer key

T1L2S4

Area of a Rectangle

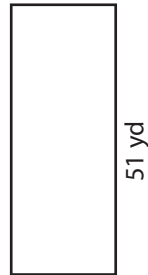
Find the area of each rectangle.

1)



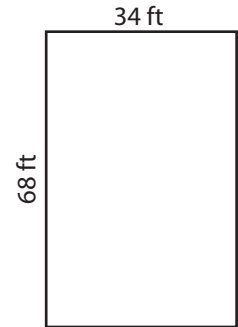
Area = **1,591 in²**

2)



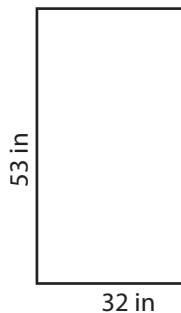
Area = **1,152 yd²**

3)



Area = **2,312 ft²**

4)



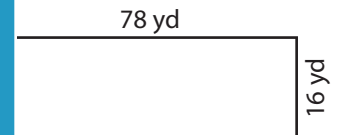
Area = **1,696 in²**

Gain complete access to the largest collection of worksheets in all subjects!

Members, please log in to download this worksheet.

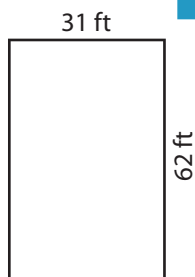
Not a member? Please sign up to gain complete access.

www.mathworksheets4kids.com

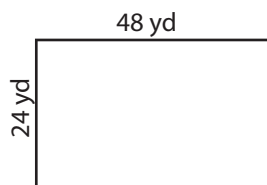


Area = **1,248 yd²**

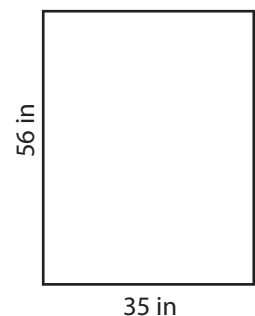
7)



Area = **1,922 ft²**



Area = **1,152 yd²**



Area = **1,960 in²**